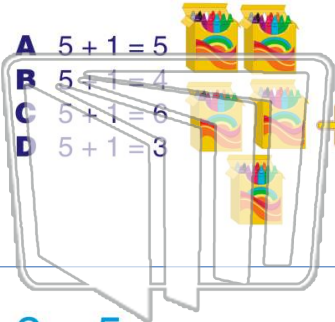




Name \_\_\_\_\_ Class \_\_\_\_\_ Date \_\_\_\_\_

1 Which is right?

- A  $5 + 1 = 5$
- B  $5 + 1 = 4$
- C  $5 + 1 = 6$
- D  $5 + 1 = 3$



2  $1 + 1 =$



- A 2
- B 0
- C 1
- D 3

3  $2 + 5 =$



4  $2 + 1 =$



5



## PREVIEW

Please [Sign In](#) or [Sign Up](#) to download the printable version of this worksheet


7



- A  $4 + 1 = 3$
- B  $4 + 1 = 4$
- C  $4 + 1 = 5$
- D  $4 + 1 = 6$

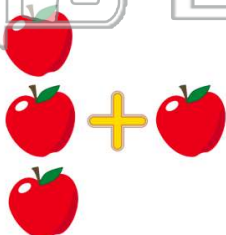
$2 + 4 =$

- A 6
- B 3
- C 5
- D 4



9  $3 + 1 =$

- A 5
- B 3
- C 2
- D 4



10  $1 + 6 =$

- A 5
- B 6
- C 7
- D 8





Name \_\_\_\_\_ Class \_\_\_\_\_ Date \_\_\_\_\_

1 Which is right?

A  $5 + 1 = 5$   
 B  $5 + 1 = 4$   
 C  $5 + 1 = 6$   
 D  $5 + 1 = 3$

2  $1 + 1 =$

A 2  
 B 0  
 C 1  
 D 3

3  $2 + 5 =$

4  $2 + 1 =$

5

**PREVIEW**

Please [Sign In](#) or [Sign Up](#) to download the printable version of this worksheet

7

A  $4 + 1 = 3$   
 B  $4 + 1 = 4$   
 C  $4 + 1 = 5$   
 D  $4 + 1 = 6$

8  $2 + 4 =$

A 6  
 B 3  
 C 5  
 D 4

9  $3 + 1 =$

A 5  
 B 3  
 C 2  
 D 4

10  $1 + 6 =$

A 5  
 B 6  
 C 7  
 D 8