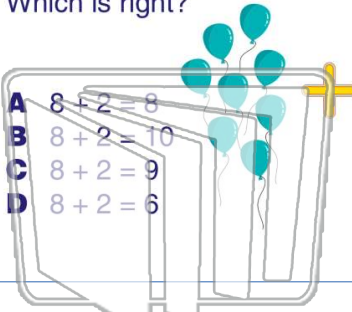




Name _____ Class _____ Date _____

1 Which is right?

- A $8 + 2 = 8$
- B $8 + 2 = 10$
- C $8 + 2 = 9$
- D $8 + 2 = 6$



2 $3 + 3 =$

- A 3
- B 0
- C 5
- D 6



NEW PATH LEARNING

3 Which is right?



4 Which is right?

A $8 + 1 = 8$



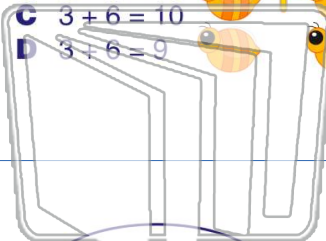

5

PREVIEW

Please [Sign In](#) or [Sign Up](#) to download the printable version of this worksheet

7

- A $3 + 6 = 3$
- B $3 + 6 = 8$
- C $3 + 6 = 10$
- D $3 + 6 = 9$



- A 8
- B 10
- C 9
- D 7




NEW PATH LEARNING

9

$4 + 4 =$

- A 8
- B 7
- C 9
- D 4



10

$7 + 2 =$

- A 5
- B 7
- C 8
- D 9

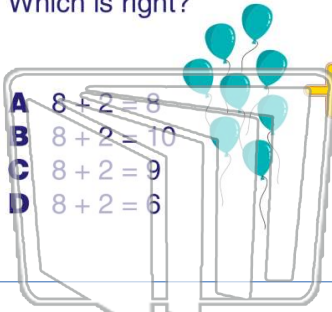




Name _____ Class _____ Date _____

1 Which is right?

- A $8 + 2 = 8$
- B $8 + 2 = 10$
- C $8 + 2 = 9$
- D $8 + 2 = 6$



2 $3 + 3 =$



- A 3
- B 0
- C 5
- D 6

D

3 Which is right?



4 Which is right?



A $8 + 1 = 8$

C

5




PREVIEW

Please [Sign In](#) or [Sign Up](#) to download the printable version of this worksheet

C

7

- A $3 + 6 = 3$
- B $3 + 6 = 8$
- C $3 + 6 = 10$
- D $3 + 6 = 9$



D

- A 8
- B 10
- C 9
- D 7

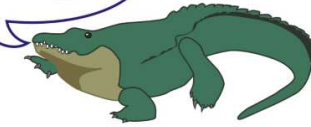


B

9

$4 + 4 =$

- A 8
- B 7
- C 9
- D 4



A

10

$7 + 2 =$

- A 5
- B 7
- C 8
- D 9



D