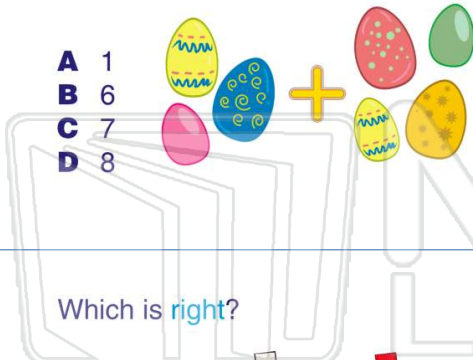




Name _____ Class _____ Date _____

1 $3 + 4 =$

- A 1
- B 6
- C 7
- D 8



2 $7 + 3 =$

- A 10
- B 9
- C 7
- D 3



3 Which is right?

- A $4 + 5 = 1$
- B $4 + 5 = 4$



4 $6 + 4 =$

- A 6
- B 5



5




PREVIEW

Please [Sign In](#) or [Sign Up](#) to download the printable version of this worksheet

7

- B 9
- C 1
- D 10



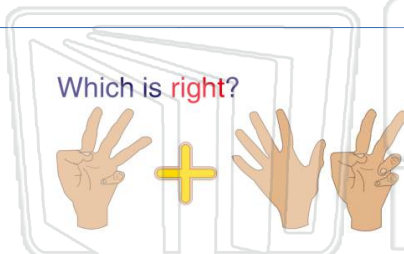
- B 4
- C 2
- D 9



9

Which is right?

- A $3 + 7 = 4$
- B $3 + 7 = 10$
- C $3 + 7 = 7$
- D $3 + 7 = 9$



10 $5 + 2 =$

- A 5
- B 3
- C 8
- D 7






Name _____ Class _____ Date _____

1 $3 + 4 =$

- A 1
- B 6
- C 7
- D 8



(C)

2 $7 + 3 =$

- A 10
- B 9
- C 7
- D 3



(A)

3 Which is right?

- A $4 + 5 = 1$
- B $4 + 5 = 4$



(D)

4 $6 + 4 =$

- A 6
- B 5



(C)

5




(A)

PREVIEW

Please [Sign In](#) or [Sign Up](#) to download the printable version of this worksheet

7

- B 9
- C 1
- D 10



- B 4
- C 2
- D 9




(A)

9

Which is right?

- A $3 + 7 = 4$
- B $3 + 7 = 10$
- C $3 + 7 = 7$
- D $3 + 7 = 9$



(B)

10 $5 + 2 =$

- A 5
- B 3
- C 8
- D 7



(D)