




Name _____ Class _____ Date _____

1

More than



4 ice cream cones

A 2
B 1
C 3
D 7

2

Less than



8 gumdrops

A 10
B 7
C 9
D 11

3

Less than 5

4

More than



5




PREVIEW

Please [Sign In](#) or [Sign Up](#) to download the printable version of this worksheet

7

More than



3 computers

A 3
B 1
C 2
D 4

Less than



7 pieces of candy

A 8
B 7
C 9
D 5

9

Less than



6 bears

A 5
B 6
C 7
D 8

10

More than



2 dinosaurs


A 0
B 1
C 2
D 3



Name _____ Class _____ Date _____

1

More than



4 ice cream cones

A 2
B 1
C 3
D 7

2

Less than



8 gumdrops

A 10
B 7
C 9
D 11

3

Less than 5

4

More than



5




PREVIEW

Please [Sign In](#) or [Sign Up](#) to download the printable version of this worksheet

7

More than



3 computers

A 3
B 1
C 2
D 4

8

Less than



7 pieces of candy

A 8
B 7
C 9
D 5

9

Less than



6 bears

A 5
B 6
C 7
D 8

10

More than



2 dinosaurs

A 0
B 1
C 2
D 3