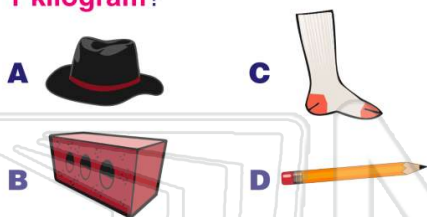




Name _____ Class _____ Date _____

- 1 Which weighs **more** than **1 kilogram**?



- 2 A **pineapple** weighs _____
1 gram.


A more than
B less than



- 3 A 1 centimeter
B $1\frac{1}{2}$ centimeters



4



5



PREVIEW

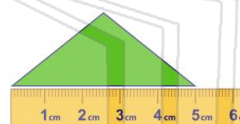
7

Please [Sign In](#) or [Sign Up](#) to download the printable version of this worksheet



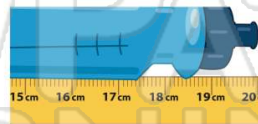
A 23 centimeters
B 12 centimeters
C 1 centimeter
D 2 centimeters

9



A 6 centimeters
B 5 centimeters
C 4 centimeters
D 3 centimeters

10



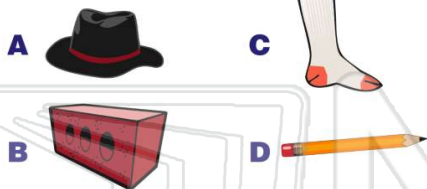
A 19 centimeters
B 21 centimeters
C 20 centimeters
D 2 centimeters



Name _____ Class _____ Date _____

1

Which weighs **more** than **1 kilogram**?


**(B)****2**

A **pineapple** weighs _____
1 gram.

- A** more than
B less than

**(A)****3**

- A** 1 centimeter
B $1\frac{1}{2}$ centimeters

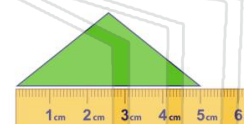
**(C)****4****(A)****5****(B)**

PREVIEW

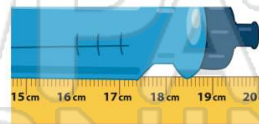
Please [Sign In](#) or [Sign Up](#) to download the printable version of this worksheet

7**(D)****B****D**

- A** 23 centimeters
B 12 centimeters
C 1 centimeter
D 2 centimeters

9

- A** 6 centimeters
B 5 centimeters
C 4 centimeters
D 3 centimeters

(B)**10**

- A** 19 centimeters
B 21 centimeters
C 20 centimeters
D 2 centimeters

(C)