

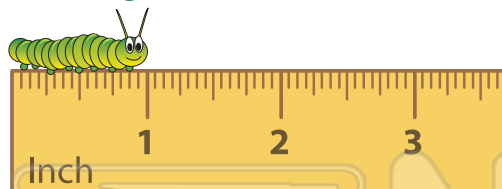


Measurement

Math

Name _____ Class _____ Date _____

- 1 How long? Circle the measurement.



$\frac{1}{2}$ inch 1 inch 2 inches

- 6 Which holds **less than 1 quart**?



- 2 How long? Circle the measurement.



- 7 The **cow** weighs _____
1 pound.

more than



- 3 _____



ound.

- 4 Please Sign In or Sign Up to download
the printable version of this worksheet




2 centimeters




3 centimeters

- 5 How long? Circle the measurement.



4 inches 3 inches $3\frac{1}{2}$ inches

- 10 Which weighs **about 1 gram**? Circle it.



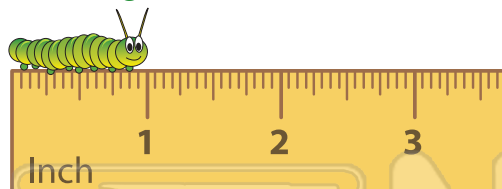


Measurement - Answer Key

Math

Name _____ Class _____ Date _____

- 1 How long? Circle the measurement.



$\frac{1}{2}$ inch

1 inch

2 inches

- 2 How long? Circle the measurement.



4 inches

- 3 Which is heavier?



PREVIEW

Please [Sign In](#) or [Sign Up](#) to download the printable version of this worksheet

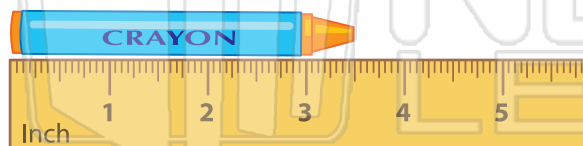
- 4 Which is heavier?



2 centimeters

3 centimeters

- 5 How long? Circle the measurement.



4 inches

3 inches

$3\frac{1}{2}$ inches

- 6 Which holds less than 1 quart?



- 7 The cow weighs more than 1 pound.



- 10 Which weighs about 1 gram? Circle it.

