



Name \_\_\_\_\_ Class \_\_\_\_\_ Date \_\_\_\_\_

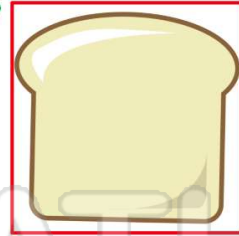
1 Which shape?

- A square
- B circle
- C oval
- D triangle



2 Which shape?

- A square
- B diamond
- C circle
- D rectangle



3 Which shape?

- A circle
- B oval



4 Which shape?

- A triangle
- B rectangle



5



## PREVIEW

Please [Sign In](#) or [Sign Up](#) to download the printable version of this worksheet

7

- C triangle
- D circle

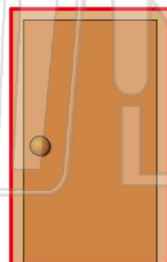


- C oval
- D diamond



9 Which shape?

- A square
- B diamond
- C triangle
- D rectangle



10 Which shape?

- A rectangle
- B triangle
- C circle
- D diamond





Name \_\_\_\_\_ Class \_\_\_\_\_ Date \_\_\_\_\_

1 Which shape?

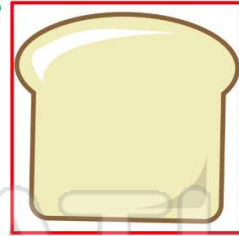
- A square
- B circle
- C oval
- D triangle



(B)

2 Which shape?

- A square
- B diamond
- C circle
- D rectangle



(A)

3 Which shape?

- A circle
- B oval



(D)

4 Which shape?

- A triangle
- B rectangle



(C)

5



(A)

## PREVIEW

Please [Sign In](#) or [Sign Up](#) to download the printable version of this worksheet

7

- C triangle
- D circle



(D)

- C oval
- D diamond

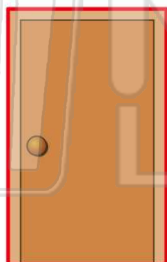


(A)

9

Which shape?

- A square
- B diamond
- C triangle
- D rectangle



(D)

10 Which shape?

- A rectangle
- B triangle
- C circle
- D diamond



(C)