




Name _____ Class _____ Date _____

1 Which shape?



- A rectangle
- B square
- C circle
- D oval

2 Which shape?



- A triangle
- B circle
- C square
- D diamond

3 Which shape?

- A rectangle
- B square



4 Which shape?

- A rectangle
- B circle



5




PREVIEW

Please [Sign In](#) or [Sign Up](#) to download the printable version of this worksheet

7

- C rectangle
- D circle



- C rectangle
- D oval



9

Which shape?

- A circle
- B oval
- C square
- D diamond



10

Which shape?

- A square
- B diamond
- C rectangle
- D triangle





Name _____ Class _____ Date _____


1 Which shape?



- A rectangle
- B square
- C circle
- D oval

A

2 Which shape?



- A triangle
- B circle
- C square
- D diamond

B

3 Which shape?



- A rectangle
- B square

D

4 Which shape?



- A rectangle
- B circle

C

5



A

PREVIEW

Please [Sign In](#) or [Sign Up](#) to download the printable version of this worksheet

7

- C rectangle
- D circle



- C rectangle
- D oval



C

9 Which shape?



- A circle
- B oval
- C square
- D diamond

C

10 Which shape?



- A square
- B diamond
- C rectangle
- D triangle

D