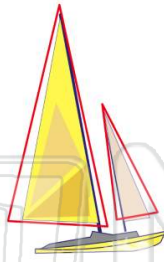




Name _____ Class _____ Date _____

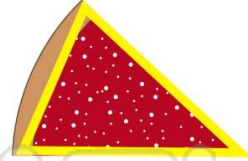
1 Which shape?

- A square
- B triangle
- C rectangle
- D oval



2 Which shape?

- A square
- B rectangle
- C circle
- D triangle



3 Which shape?

- A oval
- B diamond



4 Which shape?

- A rectangle
- B circle



5



PREVIEW

Please [Sign In](#) or [Sign Up](#) to download the printable version of this worksheet


7

- C diamond
- D triangle

- C triangle
- D rectangle

9 Which shape?

- A diamond
- B square
- C oval
- D triangle



10 Which shape?

- A square
- B circle
- C triangle
- D diamond

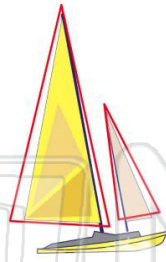




Name _____ Class _____ Date _____

1 Which shape?


- A square
- B triangle
- C rectangle
- D oval



(B)

2 Which shape?

- A square
- B rectangle
- C circle
- D triangle



(D)

3 Which shape?

- A oval
- B diamond



(C)

4 Which shape?

- A rectangle
- B circle



(A)

5



(B)

PREVIEW

Please [Sign In](#) or [Sign Up](#) to download the printable version of this worksheet

7


- C diamond
- D triangle

- C triangle
- D rectangle

(A)

9 Which shape?

- A diamond
- B square
- C oval
- D triangle



(C)

10 Which shape?

- A square
- B circle
- C triangle
- D diamond



(D)