




Name _____ Class _____ Date _____


1 Ken and Stan slid down the hill **10 times in all**. Ken slid down **5 times**. How many times did Stan slide down?

A 2
B 3
C 5
D 10



2 Rick has **2 pens**. Tina has **4 pens**. How many pens do they have in all?

A 2
B 3
C 4
D 6



3 Mike baked **2 cakes**. Kate baked **2 more**. How many cakes did they bake in all?

4 Becky rode her bike **2 miles**. Al rode his bike **7 miles**. How many more miles did Al ride than Becky?



PREVIEW

Please [Sign In](#) or [Sign Up](#) to download the printable version of this worksheet


7 **4 bugs**. How many bugs do they have in all?

A 0
B 1
C 4
D 8



8 In the first grade classroom, there are **12 girls** and **5 boys**. How many more girls than boys?

A 2
B 7
C 9
D 16




9 Pam is **7 years old**. Mark is **1 year older**. How old is Mark?

A 1
B 6
C 7
D 8



10 Pete read **5 books**. Jane read **6 books**. How many more books did Jane read than Pete?

A 11
B 5
C 1
D 6

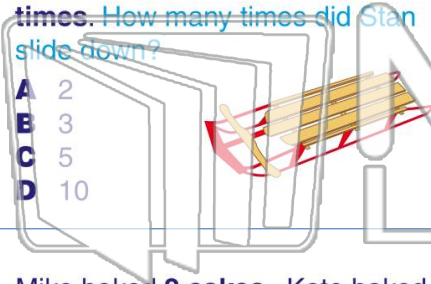




Name _____ Class _____ Date _____

1 Ken and Stan slid down the hill **10 times in all**. Ken slid down **5 times**. How many times did Stan slide down?

- A 2
- B 3
- C 5
- D 10



2 Rick has **2 pens**. Tina has **4 pens**. How many pens do they have in all?

- A 2
- B 3
- C 4
- D 6



3 Mike baked **2 cakes**. Kate baked **2 more**. How many cakes did they bake in all?

4 Becky rode her bike **2 miles**. Al rode his bike **7 miles**. How many more miles did Al ride than Becky?



5 **PREVIEW**
Please [Sign In](#) or [Sign Up](#) to download the printable version of this worksheet

7 **4 bugs**. How many bugs do they have in all?

- A 0
- B 1
- C 4
- D 8



the first grade classroom. How many more girls than boys?

- A 2
- B 7
- C 9
- D 16



9 Pam is **7 years old**. Mark is **1 year older**. How old is Mark?

- A 1
- B 6
- C 7
- D 8



10 Pete read **5 books**. Jane read **6 books**. How many more books did Jane read than Pete?

- A 11
- B 5
- C 1
- D 6

