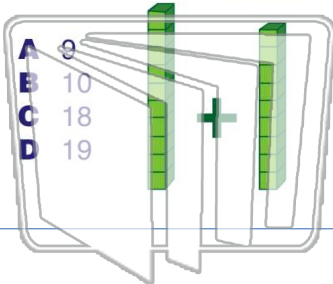




Name \_\_\_\_\_ Class \_\_\_\_\_ Date \_\_\_\_\_

1  $10 + 9 = \underline{\quad}$



2  $13 + 8 = \underline{\quad}$



3  $17 + 7 = \underline{\quad}$

4  $6 + 42 = \underline{\quad}$

5

**PREVIEW**

Please [Sign In](#) or [Sign Up](#) to download the printable version of this worksheet

7

	TENS	ONES
A	1	5
+	1	1

	TENS	ONES
C	1	8
+		6

	TENS	ONES
B	1	7
+		9

	TENS	ONES
D	1	6
+		9

A	$25 + 6 = 30$
B	$25 + 6 = 31$
C	$25 + 6 = 29$
D	$25 + 6 = 32$

	TENS	ONES
	2	5
+		6

9

Which sum is 50?

	TENS	ONES
A	2	4
+	2	4

	TENS	ONES
C	2	6
+	2	6

	TENS	ONES
B	2	3
+	2	3

	TENS	ONES
D	2	5
+	2	5

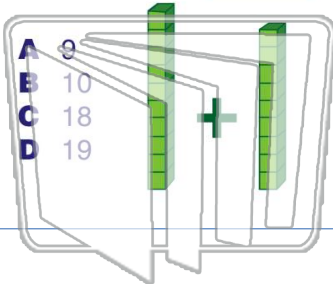
10  $25 - 23 = \underline{\quad}$

A	3
B	4
C	2
D	5



Name \_\_\_\_\_ Class \_\_\_\_\_ Date \_\_\_\_\_

1  $10 + 9 = \underline{\quad}$



2  $13 + 8 = \underline{\quad}$



3  $17 + 7 = \underline{\quad}$

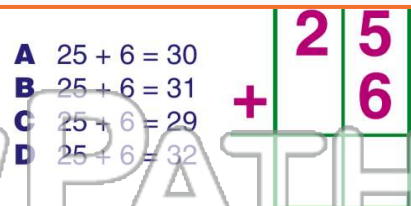
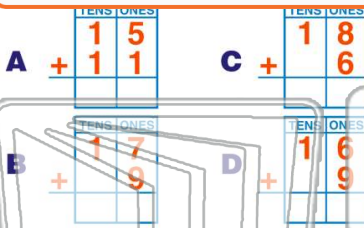
4  $6 + 42 = \underline{\quad}$

5

**PREVIEW**

Please [Sign In](#) or [Sign Up](#) to download the printable version of this worksheet

7



9

