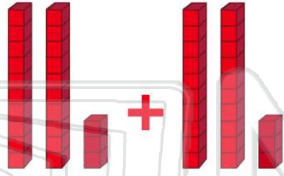




Name _____ Class _____ Date _____

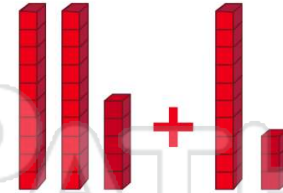
1 $23 + 23 =$

- A 23
- B 45
- C 46
- D 64



2 $25 + 13 =$

- A 37
- B 38
- C 39
- D 40



3 $50 - 30 =$

- A 20



4 Which is right?

- A $27 - 5 = 22$
- B $27 - 5 = 23$

TENS	ONES
2	7
	5

5



PREVIEW

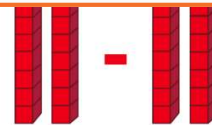
Please [Sign In](#) or [Sign Up](#) to download the printable version of this worksheet

7

- A 11
- B 12
- C 10
- D 13



- A 5
- B 1
- C 2
- D 0



9

Which is correct?

- A $33 - 4 = 9$
- B $33 - 4 = 19$
- C $33 - 4 = 29$
- D $33 - 4 = 30$

TENS	ONES
3	3
	4

10

Which sum is 24?

A

TENS	ONES
1	2
1	2

B

TENS	ONES
1	1
1	1

C

TENS	ONES
1	1
1	2

D

TENS	ONES
1	2
1	0

