



Name \_\_\_\_\_ Class \_\_\_\_\_ Date \_\_\_\_\_

1 Which is **heavier**: a desk or a chair?



2 Find the correct order from **shortest to longest**.



- A whale, snake, rabbit, caterpillar
- B caterpillar, snake, rabbit, whale
- C caterpillar, rabbit, snake, whale
- D snake, rabbit, caterpillar, whale

3 Which is the **shortest**?



4 Would you use a **yard stick** or a **ruler** to measure how long your foot is?

5

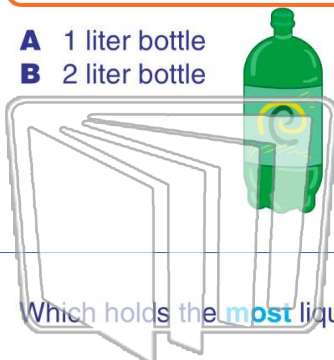


## PREVIEW

Please [Sign In](#) or [Sign Up](#) to download the printable version of this worksheet

7

- A 1 liter bottle
- B 2 liter bottle



- A 1 meter
- B 1,000 meters
- C 10 meters
- D 100 meters

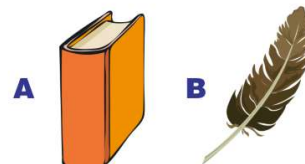


9 Which holds the **most** liquid?

- A pint
- B quart
- C gallon
- D pound



10 Which is **heavier**: a book or a feather?





Name \_\_\_\_\_ Class \_\_\_\_\_ Date \_\_\_\_\_

1 Which is **heavier**: a desk or a chair?



- A desk
- B chair

2 Find the correct order from **shortest to longest**.



- A whale, snake, rabbit, caterpillar
- B caterpillar, snake, rabbit, whale
- C caterpillar, rabbit, snake, whale
- D snake, rabbit, caterpillar, whale

3 Which is the **shortest**?



A

C

4 Would you use a **yard stick** or a **ruler** to measure how long your foot is?

5

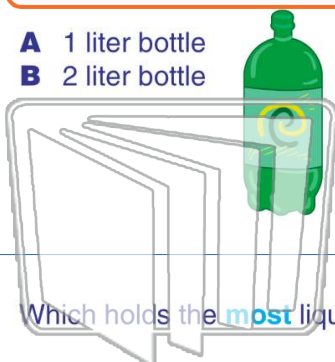


## PREVIEW

Please [Sign In](#) or [Sign Up](#) to download the printable version of this worksheet

7

- A 1 liter bottle
- B 2 liter bottle



- A pint
- B quart
- C gallon
- D pound




- A 1 meter
- B 1,000 meters
- C 10 meters
- D 100 meters



9 Which holds the **most** liquid?

10 Which is **heavier**: a book or a feather?



A

B