

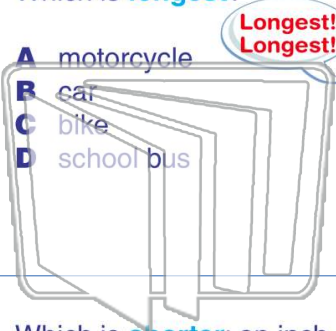


Name \_\_\_\_\_ Class \_\_\_\_\_ Date \_\_\_\_\_

1

Which is **longest**?


- A motorcycle
- B car
- C bike
- D school bus



2

Which is **longer**: 1 foot or 1 yard?

- A foot
- B yard



3

Which is **shorter**: an inch or a foot?



4

Which weighs **more**: a 5 pound bag of sugar or a 10 pound sack of potatoes?

5

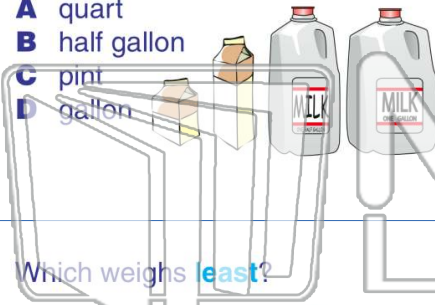


## PREVIEW

Please [Sign In](#) or [Sign Up](#) to download the printable version of this worksheet

7

- A quart
- B half gallon
- C pint
- D gallon




- A length of a street
- B length of a driveway



9

Which weighs **least**?

- A 
- B 
- C 
- D 

10

Which is **tallest**?

- A door
- B table
- C house
- D window

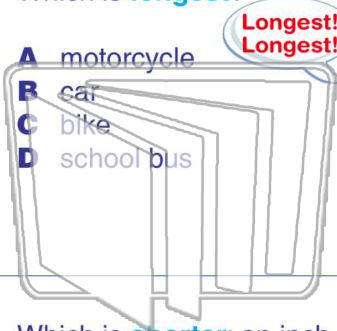




Name \_\_\_\_\_ Class \_\_\_\_\_ Date \_\_\_\_\_


1 Which is **longest**?

- A motorcycle
- B car
- C bike
- D school bus



2 Which is **longer**: 1 foot or 1 yard?

- A foot
- B yard



3 Which is **shorter**: an inch or a foot?



4 Which weighs **more**: a 5 pound bag of sugar or a 10 pound sack of potatoes?

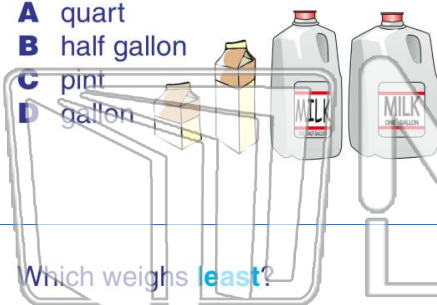


## PREVIEW

Please [Sign In](#) or [Sign Up](#) to download the printable version of this worksheet

7

- A quart
- B half gallon
- C pint
- D gallon



- A length of a street
- B length of a driveway



9 Which weighs **least**?

- A bicycle
- B pen
- C book
- D chair

10 Which is **tallest**?

- A door
- B table
- C house
- D window

