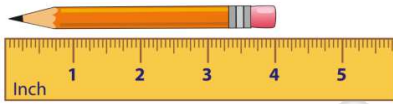




Name _____ Class _____ Date _____

1 The **pencil** is _____ inches **long**.



- A 5
- B $4\frac{1}{2}$
- C 4
- D 3

2 How **long** is the **inchworm**?



- A 3 inches
- B 2 inches
- C 1 inch
- D $2\frac{1}{2}$ inches

3 About how long is a **crayon**?

- A 4 inches
- B 4 feet

4 A paper clip is **1 inch** long. How many paper clips are in **1 foot**?

- A 12

5



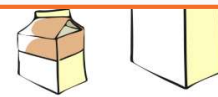
PREVIEW

Please [Sign In](#) or [Sign Up](#) to download the printable version of this worksheet

7

- B 4 inches
- C $3\frac{1}{2}$ inches
- D $4\frac{1}{2}$ inches

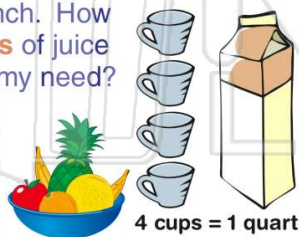
- B 3
- C 2
- D 1



2 pints = 1 quart

9 Jeremy wants to make **2 quarts** of fruit punch. How many **cups** of juice does Jeremy need?

- A 2 cups
- B 4 cups
- C 6 cups
- D 8 cups



10 Sara has **2 cups** of apple juice for lunch. How many **pints** of apple juice does Sara have?

- A 1 pint
- B 2 pints
- C 3 pints
- D 4 pints

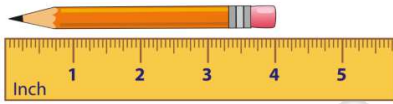


1 pint = 2 cups



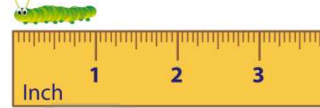
Name _____ Class _____ Date _____

1 The **pencil** is _____ inches **long**.



- A 5
- B $4\frac{1}{2}$
- C 4
- D 3

2 How **long** is the **inchworm**?



- A 3 inches
- B 2 inches
- C 1 inch
- D $2\frac{1}{2}$ inches

3 About how long is a **crayon**?

- A 4 inches
- B 4 feet

4 A paper clip is **1 inch** long. How many paper clips are in **1 foot**?

- A 12

5



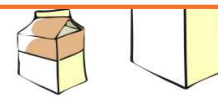
PREVIEW

Please [Sign In](#) or [Sign Up](#) to download the printable version of this worksheet

7

- B 4 inches
- C $3\frac{1}{2}$ inches
- D $4\frac{1}{2}$ inches


- B 3
- C 2
- D 1



2 pints = 1 quart

9 Jeremy wants to make **2 quarts** of fruit punch. How many **cups** of juice does Jeremy need?

- A 2 cups
- B 4 cups
- C 6 cups
- D 8 cups



10 Sara has **2 cups** of apple juice for lunch. How many **pints** of apple juice does Sara have?

- A 1 pint
- B 2 pints
- C 3 pints
- D 4 pints



1 pint = 2 cups