





Name _____ Class _____ Date _____

Estimate before you measure!

How many units equals the mass of...		
Units	I estimated	I measured
1 domino 		
2 dominoes		
3 dominoes		
4 dominoes		

How many units equals the mass of...		
Units	I estimated	I measured
1 rod 		
2 rods		
3 rods		

YOU NEED:

- ☆ balance
- ☆ dominoes
- ☆ base 10 blocks





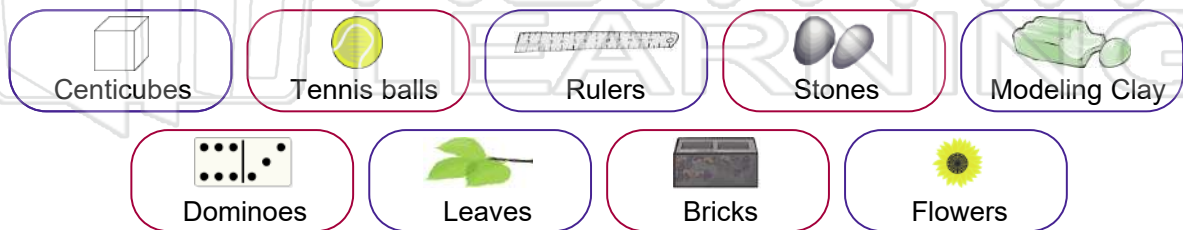
PREVIEW

Please [Sign In](#) or [Sign Up](#) to download the printable version of this worksheet

They had the same results when they measured with _____ because _____

They had different results when they used _____ because _____


Color the 5 best units for measuring mass.






ANSWER KEY


Estimate before you measure!

How many units equals the mass of...		
Units	I estimated	I measured
1 domino 		
2 dominoes		
3 dominoes		
4 dominoes		

How many units equals the mass of...		
Units	I estimated	I measured
1 rod 		
2 rods		
3 rods		

YOU NEED:

- ☆ balance
- ☆ dominoes
- ☆ base 10 blocks



PREVIEW

Please [Sign In](#) or [Sign Up](#) to download the printable version of this worksheet

They had the same results when they measured with _____
Dominoes, Rulers and Pop sticks because
they each have the same mass

They had different results when they used _____ shape blocks
because they used different shapes and they had different mass

Color the 5 best units for measuring mass.

