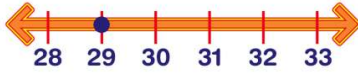




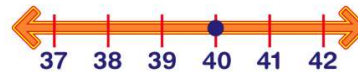
Name _____ Class _____ Date _____

1 What number is **one more** than 29?



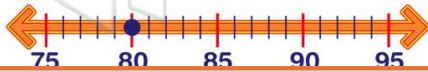
- A 28
- B 30
- C 39
- D 19

2 What number is **one less** than 40?



- A 39
- B 30
- C 41
- D 50

3 Start at 80. **Add 10**. Now **add 1**. What number are you on?



4 Michele has 100 cents. She loses **one penny**. How many pennies does she have now?



PREVIEW

Please [Sign In](#) or [Sign Up](#) to download the printable version of this worksheet

7 **B** nickel
C penny
D dime



B three o'clock
C four o'clock
D two o'clock



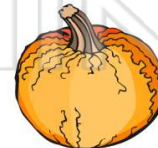
9 Marta had 24 cookies. She gave **one** to her dad. Now she has _____ cookies.

- A 25
- B 23
- C 22
- D 21



10 There were 102 pumpkins in the patch. A kid picked **one**. Now there are _____ pumpkins.

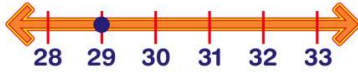
- A 100
- B 99
- C 110
- D 101





Name _____ Class _____ Date _____

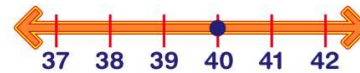
1 What number is **one more** than 29?



- A 28
- B 30
- C 39
- D 19

(B)

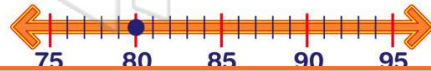
2 What number is **one less** than 40?



- A 39
- B 30
- C 41
- D 50

(A)

3 Start at 80. **Add 10**. Now **add 1**. What number are you on?



(C)

4 Michele has **100** cents. She loses **one penny**. How many pennies does she have now?



(B)

5



(D)

PREVIEW

Please [Sign In](#) or [Sign Up](#) to download the printable version of this worksheet

7

- B nickel
- C penny
- D dime



- B three o'clock
- C four o'clock
- D two o'clock



(C)

9 Marta had **24** cookies. She gave **one** to her dad. Now she has _____ cookies.

- A 25
- B 23
- C 22
- D 21



(B)

10 There were **102** pumpkins in the patch. A kid picked **one**. Now there are _____ pumpkins.

- A 100
- B 99
- C 110
- D 101



(D)