



Name _____ Class _____ Date _____

1 I had **76** cents. Now I have **one more**. How many cents do I have?

A 77¢
B 75¢
C 86¢
D 67¢

2 Jonah had **98** baseball cards. He **lost one**. How many baseball cards does Jonah have now?

- A 87 C 97
B 99 D 96

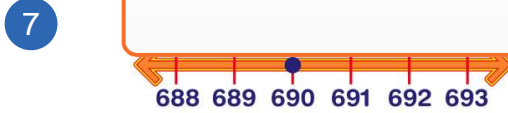


3 There were **19** ducks in the pond. **One more** duck landed in the pond. Now how many ducks are there?

4 Luisa had **206** pennies in her bank. She **lost one**. Then she found another penny. How many pennies does she have now?



5 **PREVIEW**
Please [Sign In](#) or [Sign Up](#) to download the printable version of this worksheet



- A 689
B 691
C 680
D 590

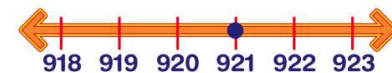
- A 710
B 708
C 719
D 809

9 Add **one more** to **889**. What number do you get?

- A 989
B 899
C 890
D 888

889 + 1 =

10 Start at **921**. Count **back one**. You are at number ____.

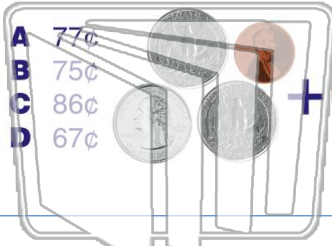


- A 911 C 821
B 920 D 922



Name _____ Class _____ Date _____

1 I had 76 cents. Now I have **one more**. How many cents do I have?



2 Jonah had 98 baseball cards. He **lost one**. How many baseball cards does Jonah have now?

- A 87
- B 99
- C 97
- D 96



3 There were 19 ducks in the pond. **One more** duck landed in the pond. Now how many ducks are there?

4 Luisa had 206 pennies in her bank. She **lost one**. Then she found another penny. How many pennies does she have now?

PREVIEW

Please [Sign In](#) or [Sign Up](#) to download the printable version of this worksheet

5



7



- A 689
- B 691
- C 680
- D 590



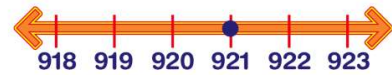
- A 710
- B 708
- C 719
- D 809

9 Add **one more** to 889. What number do you get?

- A 989
- B 899
- C 890
- D 888

889 + 1 =

10 Start at **921**. Count back **one**. You are at number _____.



- A 911
- B 920
- C 821
- D 922