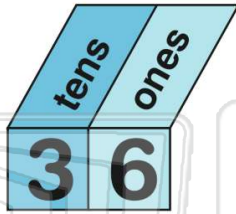




Name \_\_\_\_\_ Class \_\_\_\_\_ Date \_\_\_\_\_

1 Which digit is in the **ones place**?

- A 3
- B 6
- C 0
- D 2



2 What is the **highest digit** you can write in the **ones place**?

- A 10
- B 1
- C 9
- D 0

# ONES?

3 How many blocks?



4 How many blocks?

- A 8
- B 80



5



## PREVIEW

Please [Sign In](#) or [Sign Up](#) to download the printable version of this worksheet

7

- B nineteen
- C nine hundred
- D ninety



- C 9 tens and 4 tens
- D 49 tens and 0 ones



9

\_\_\_ tens and 0 ones is the **same as** 70 ones.

- A 70
- B 71
- C 7
- D 700

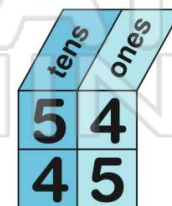


10

Which number is **greater**?

**54** or **45**

- A 54
- B 45

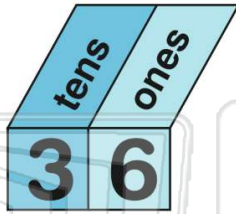




Name \_\_\_\_\_ Class \_\_\_\_\_ Date \_\_\_\_\_

1 Which digit is in the **ones place**?

- A 3
- B 6
- C 0
- D 2



(B)

2 What is the **highest digit** you can write in the **ones place**?

- A 10
- B 1
- C 9
- D 0

# ONES?

(C)

3 How many blocks?



(B)

4 How many blocks?

- A 8
- B 80



(A)

5



(B)

## PREVIEW

Please [Sign In](#) or [Sign Up](#) to download the printable version of this worksheet

7

- B nineteen
- C nine hundred
- D ninety



- C 9 tens and 4 tens
- D 49 tens and 0 ones



(B)

9 \_\_\_\_\_ tens and 0 ones is the **same as** 70 ones.

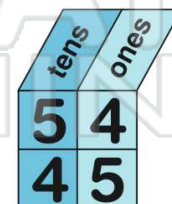
- A 70
- B 71
- C 7
- D 700



(C)

10 Which number is **greater**?  
**54** or **45**

- A 54
- B 45



(A)