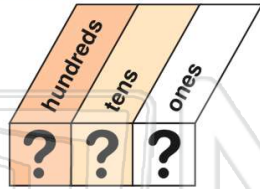




Name \_\_\_\_\_ Class \_\_\_\_\_ Date \_\_\_\_\_

1 How do you write the number **two hundred two**?

- A 220
- B 202
- C 2,002
- D 222



2 In the number **409**, the **nine** is in the \_\_\_\_\_ place.

- A tens
- B hundreds
- C nines
- D ones



3 What is the **greatest digit** you can put in the **hundreds place**?

- A 0

4 Which is **greater**?  
**9 tens 7 ones** or **7 tens 9 ones**

- A 9 tens 7 ones

5



## PREVIEW

Please [Sign In](#) or [Sign Up](#) to download the printable version of this worksheet

7

790    800    810    820

- A 810
- B 801

110    120    130    140

- A 132
- B 123

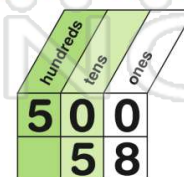
9 These numbers are the **same**:  
**8 tens 0 ones** or **eighty**

- A true
- B false



10 Which is **less**?  
**5 hundred** or **5 tens 8 ones**

- A 5 hundred
- B 5 tens 8 ones

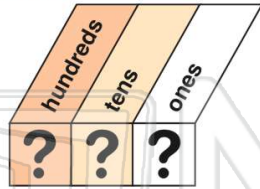




Name \_\_\_\_\_ Class \_\_\_\_\_ Date \_\_\_\_\_

1 How do you write the number **two hundred two**?

- A 220
- B 202
- C 2,002
- D 222



(B)

2 In the number **409**, the **nine** is in the \_\_\_\_\_ place.

- A tens
- B hundreds
- C nines
- D ones



(D)

3 What is the **greatest digit** you can put in the **hundreds place**?

- A 0



(B)

4 Which is **greater**?  
**9 tens 7 ones** or **7 tens 9 ones**

- A 9 tens 7 ones



(A)

5



## PREVIEW

Please [Sign In](#) or [Sign Up](#) to download the printable version of this worksheet

(C)

7

790    800    810    820

- A 810
- B 801

110    120    130    140

- A 132
- B 123

(B)

9 These numbers are the **same**:  
**8 tens 0 ones** or **eighty**

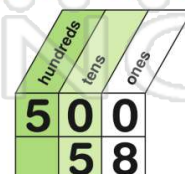
- A true
- B false



(A)

10 Which is **less**?  
**5 hundred** or **5 tens 8 ones**

- A 5 hundred
- B 5 tens 8 ones



(B)