



Name _____ Class _____ Date _____

Each column of this grid is labeled with a letter.

Each row is labeled with a number.

Find the star. On which column is it? _____

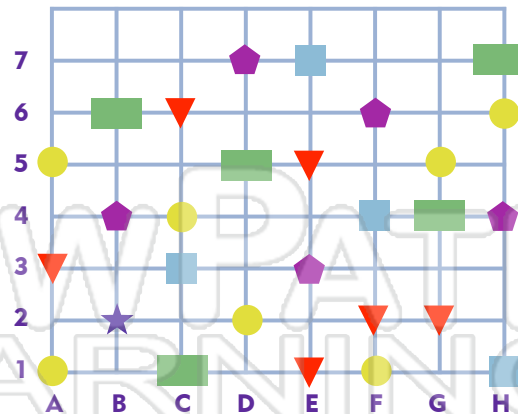
Which row? _____

Write the letter then the number. _____

This is called a coordinate.

Write the name of the shape that is found at each coordinate.

	rectangle		circle		triangle
	pentagon		square		



D2 _____ C6 _____ C1 _____
 F3 _____ A5 _____ C3 _____



PREVIEW

Please [Sign In](#) or [Sign Up](#) to download the printable version of this worksheet

Sheri _____	Josie _____	4	Craig	Polly	Mandy	Sheri	Tom	Jo
Amy _____	Mandy _____	5	Chris	Mike	Ben	Alex	Maria	Chani
Craig _____	Chani _____							

Write the name of the person who sits at these coordinates.

C2 _____	D5 _____	A1 _____
F4 _____	B3 _____	E5 _____
B2 _____	D3 _____	A2 _____
E4 _____	C1 _____	F3 _____
A3 _____	E2 _____	D1 _____
C5 _____	F1 _____	B4 _____





ANSWER KEY

Each column of this grid is labeled with a letter.

Each row is labeled with a number.

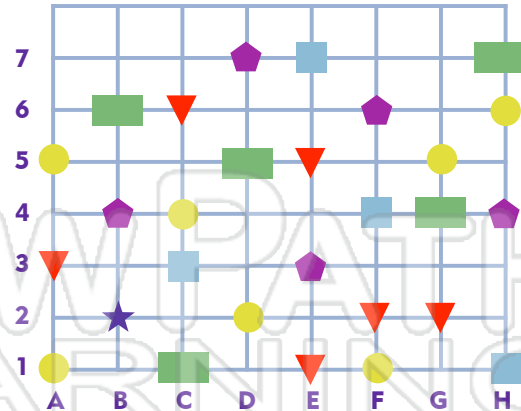
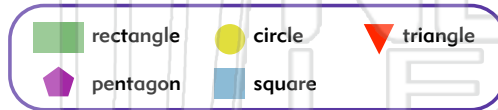
Find the star. On which column is it? B

Which row? 2

Write the letter then the number. B 2

This is called a coordinate.

Write the name of the shape that is found at each coordinate.



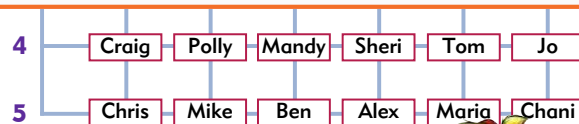
D2 circle C6 triangle C1 rectangle
 F3 pentagon A5 circle G2 triangle



PREVIEW

Please [Sign In](#) or [Sign Up](#) to download the printable version of this worksheet

Sheri D4 Josie D2
 Amy F2 Mandy C4
 Craig A4 Chani F5



Write the name of the person who sits at these coordinates.

C2 Tyler D5 Alex A1 Laura
 F4 Jo B3 Glenn E5 Maria
 B2 John D3 Grant A2 Kent
 E4 Tom C1 Kelly F3 Kathy
 A3 Jason E2 Cindy D1 Sarah
 C5 Ben F1 Jana B4 Polly

