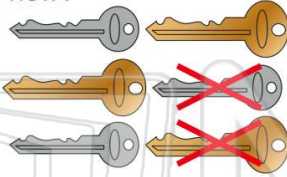




Name \_\_\_\_\_ Class \_\_\_\_\_ Date \_\_\_\_\_

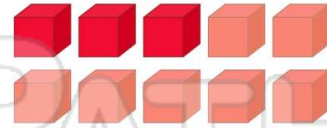
1 Ming has 6 keys. She gives 2 keys to Yoshi. How many keys does Ming have now?

- A 6
- B 2
- C 4
- D 8



2 There are 10 cubes on the table. Three are showing. How many are hidden?

- A 3
- B 7
- C 10
- D 13



3 If  $14 - 7 = 7$ , how much is  $14 - 6$ ?

- A 7
- B 6

tens	ones
1	4

4 There are 15 frogs on a log. Nine frogs jump off. How many frogs are still on the log?

tens	ones
1	5

5



## PREVIEW

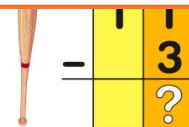
Please [Sign In](#) or [Sign Up](#) to download the printable version of this worksheet

7

- A 27
- B 9
- C 0
- D 18



- A 8 more times
- B 3 more times
- C 5 more times
- D 14 more times



9

Ming and her dad went fishing. Together they caught 19 fish. Ming caught 7 fish. How many fish did her dad catch?

- A 19 fish
- B 17 fish
- C 26 fish
- D 12 fish



tens	ones
1	9
-	7
	?

10

There were 17 dogs in the park but 8 dogs ran off. How many were left?

- A 11 dogs
- B 8 dogs
- C 25 dogs
- D 9 dogs



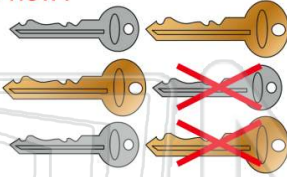
tens	ones
1	7
-	8
	?



Name \_\_\_\_\_ Class \_\_\_\_\_ Date \_\_\_\_\_

1 Ming has 6 keys. She gives 2 keys to Yoshi. How many keys does Ming have now?

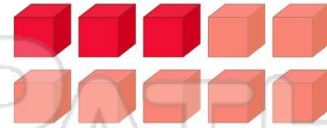
- A 6
- B 2
- C 4
- D 8



(C)

2 There are 10 cubes on the table. Three are showing. How many are hidden?

- A 3
- B 7
- C 10
- D 13



(B)

3 If  $14 - 7 = 7$ , how much is  $14 - 6$ ?

- A 7
- B 6

tens	ones
1	4

(D)

4 There are 15 frogs on a log. Nine frogs jump off. How many frogs are still on the log?

tens	ones
1	5

(A)

5



(B)

## PREVIEW

Please [Sign In](#) or [Sign Up](#) to download the printable version of this worksheet

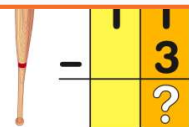
7

- A 27
- B 9
- C 0
- D 18



(C)

- A 8 more times
- B 3 more times
- C 5 more times
- D 14 more times



(A)

9 Ming and her dad went fishing. Together they caught 19 fish. Ming caught 7 fish. How many fish did her dad catch?

- A 19 fish
- B 17 fish
- C 26 fish
- D 12 fish



tens	ones
1	9
-	7
	?

(D)

10 There were 17 dogs in the park but 8 dogs ran off. How many were left?

- A 11 dogs
- B 8 dogs
- C 25 dogs
- D 9 dogs



tens	ones
1	7
-	8
	?

(D)