




Name _____ Class _____ Date _____

1 The school bus hit a bump and 7 backpacks fell off the seats. There were 20 backpacks on the bus.

How many backpacks stayed on the seats?

- A 7
- B 13
- C 20
- D 27



2 $13 - 5 = 8$

- A true
- B false



3 John thinks that $20 - 9 = 13$. Is he right?



4 There were 13 kids on the bus. Four kids got off. How many kids were left on the bus?

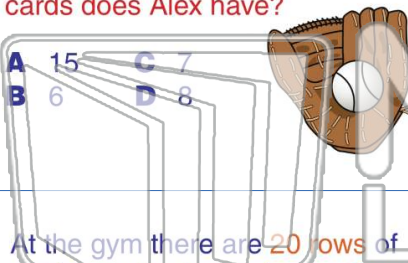


PREVIEW

Please [Sign In](#) or [Sign Up](#) to download the printable version of this worksheet

7 Alex has 15 baseball cards, and the rest are Mets cards. How many Mets cards does Alex have?

- A 15
- B 6
- C 7
- D 8



8 Some pocket change fell out of his pocket. How many dimes fell out of his pocket?

- A 0
- B 12
- C 6
- D 5



9 At the gym there are 20 rows of seats. Suri's class takes up 8 rows. How many rows are still open?

- A 12
- B 8
- C 20
- D 18

tens	ones
2	0
	8
-	?

10 Kim's class has 17 kids in it. Only 3 kids bring their lunch, so 15 kids get their lunch at school.

$$17 - 3 = 15$$

- A true
- B false





Name _____ Class _____ Date _____

1 The school bus hit a bump and 7 backpacks fell off the seats. There were 20 backpacks on the bus. How many backpacks stayed on the seats?

- A 7
- B 13
- C 20
- D 27



2 $13 - 5 = 8$

- A true
- B false



3 John thinks that $20 - 9 = 13$. Is he right?



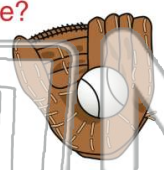
4 There were 13 kids on the bus. Four kids got off. How many kids were left on the bus?



5 **PREVIEW**
Please [Sign In](#) or [Sign Up](#) to download the printable version of this worksheet

7 Alex has 15 baseball cards, and the rest are Mets cards. How many Mets cards does Alex have?

- A 15
- B 6
- C 7
- D 8



8 Some pocket change fell out of his pocket. How many dimes fell out of his pocket?

- A 0
- B 2
- C 6
- D 5



9 At the gym there are 20 rows of seats. Suri's class takes up 8 rows. How many rows are still open?

- A 12
- B 8
- C 20
- D 18

tens	ones
2	0
	8
	?

10 Kim's class has 17 kids in it. Only 3 kids bring their lunch, so 15 kids get their lunch at school.

$17 - 3 = 15$

- A true
- B false

