

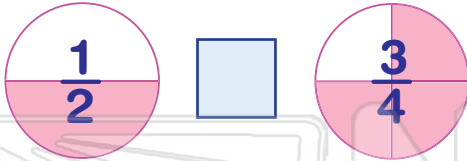


Comparing Fractions

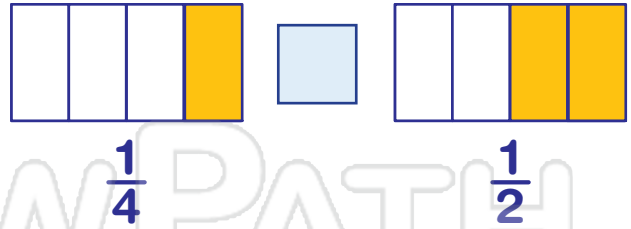
Math

Name _____ Class _____ Date _____

1 Fill in the symbol; $<$, $>$, $=$



6 Fill in the symbol; $<$, $>$, $=$



2 Fill in the symbol; $<$, $>$, $=$



7 Complete the fraction.




3 F



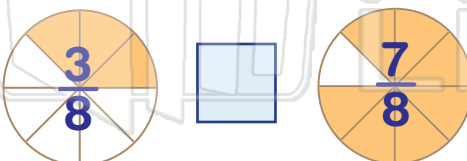
PREVIEW

Please [Sign In](#) or [Sign Up](#) to download the printable version of this worksheet

4 F

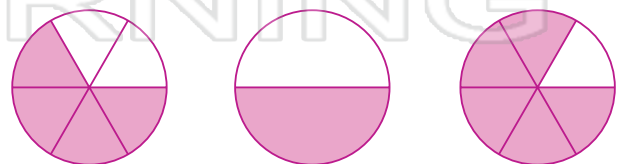


5 Fill in the symbol; $<$, $>$, $=$



10 Choose the correct fraction. Circle it.

$$\frac{4}{6} >$$





Comparing Fractions - Answer Key

Math

Name _____ Class _____ Date _____

1 Fill in the symbol; <, >, =



6 Fill in the symbol; <, >, =



2 Fill in the symbol; <, >, =



7 Complete the fraction.



3 F



PREVIEW

Please [Sign In](#) or [Sign Up](#) to download the printable version of this worksheet

4 F



10 Choose the correct fraction. Circle it.

$\frac{4}{6}$ >

5 Fill in the symbol; <, >, =

