



Name _____ Class _____ Date _____

1 One of the neighbors wants to know the **height** of his house. What type of measurement should he use?

- A miles
- B feet
- C inches
- D ounces



2 The walls in my bedroom are 8 _____ tall.

- A feet
- B inches
- C pounds
- D miles



3 A serving spoon holds about _____.

4 To find the **width** of the television, _____ should be used.



5 **PREVIEW**
Please [Sign In](#) or [Sign Up](#) to download the printable version of this worksheet

7 _____ of soup.

- A cups
- B pints
- C quarts
- D gallons



_____ measured in _____.

- A miles
- B inches
- C yards
- D pounds



9 Most round pizzas come in 8, 10, or 12 _____ widths.

- A inch
- B foot
- C yard
- D mile



10 The **weight** of a pen would be measured in _____.

- A pounds
- B inches
- C ounces
- D feet



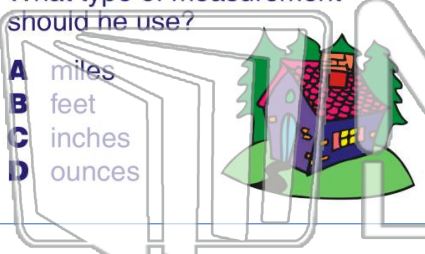


Determine Appropriate Standard of Units

Name _____ Class _____ Date _____

1 One of the neighbors wants to know the **height** of his house. What type of measurement should he use?


A miles
B feet
C inches
D ounces



(B)

2 The walls in my bedroom are 8 _____ tall.

A feet
B inches
C pounds
D miles



(A)

3 A serving spoon holds about _____.

4 To find the **width** of the television, _____ should be used.

5



PREVIEW


Please [Sign In](#) or [Sign Up](#) to download the printable version of this worksheet

(B)

(A)

7 _____ of soup.


A cups
B pints
C quarts
D gallons



(A)

_____ measured in _____.


A miles
B inches
C yards
D pounds



(B)

9 Most round pizzas come in 8, 10, or 12 _____ widths.

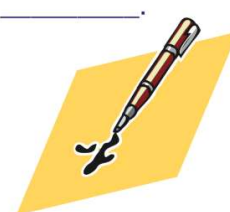
A inch
B foot
C yard
D mile



(A)

10 The **weight** of a pen would be measured in _____.

A pounds
B inches
C ounces
D feet



(C)