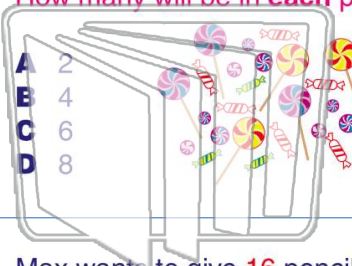




Name _____ Class _____ Date _____

1 Jack has 24 pieces of candy. He wants to put them in 6 equal piles. How many will be in each pile?



2 What number completes the number sentence?

$$36 \div 6 = \square$$

- A 5
- B 6
- C 7
- D 8

3 Max wants to give 16 pencils to 4 of his friends. Each friend gets the same number. How many pencils

4 Evan has 25 plants in his garden. There are 5 plants in each row. How many rows are there in his



5 **PREVIEW**
Please [Sign In](#) or [Sign Up](#) to download the printable version of this worksheet

7 $20 \div 5 = \square$



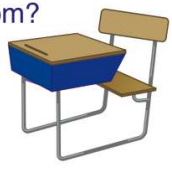
8 among the 6 students in his math group. How many stickers does he give to each student?

- A 2
- B 3
- C 4
- D 5



9 There are 24 students in the classroom. If there are 6 desks in each row, how many rows are there in the classroom?

- A 4
- B 5
- C 6
- D 7



10 What is $40 \div 8$?

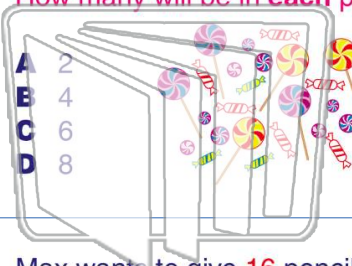
- A 5
- B 6
- C 7
- D 8





Name _____ Class _____ Date _____

1 Jack has 24 pieces of candy. He wants to put them in 6 equal piles. How many will be in each pile?



- A 2
- B 4
- C 6
- D 8

2 What number completes the number sentence?

$$36 \div 6 = \square$$

- A 5
- B 6
- C 7
- D 8

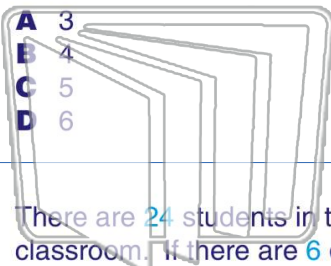
3 Max wants to give 16 pencils to 4 of his friends. Each friend gets the same number. How many pencils

4 Evan has 25 plants in his garden. There are 5 plants in each row. How many rows are there in his



5 **PREVIEW**
Please [Sign In](#) or [Sign Up](#) to download the printable version of this worksheet

7 $20 \div 5 = \square$



- A 3
- B 4
- C 5
- D 6

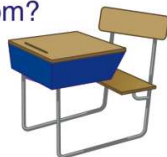
8 ... among the 6 students in his math group. How many stickers does he give to each student?



- A 2
- B 3
- C 4
- D 5

9 There are 24 students in the classroom. If there are 6 desks in each row, how many rows are there in the classroom?

- A 4
- B 5
- C 6
- D 7



10 What is $40 \div 8$?

- A 5
- B 6
- C 7
- D 8

