

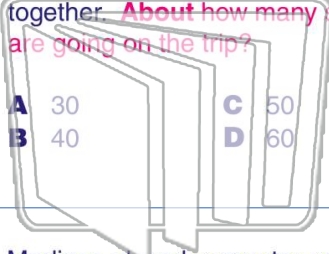


Name _____ Class _____ Date _____

1

Mr. Jones's class has **28** students. Mrs. Smith's class has **31**. Both classes are going on a field trip together. **About how many students are going on the trip?**

- A 30
- B 40
- C 50
- D 60



2

The **average** car is about _____ long.

- A 10 feet
- B 30 feet
- C 50 feet
- D 70 feet



NEWPATH LEARNING

3

Madison played computer games for **28** hours in May, **23** hours in June, and **31** hours in July. **Estimate the**

4

Nick collected seashells from the beach. He found **11** on Monday, **17** on Wednesday, and **8** on Friday.

5



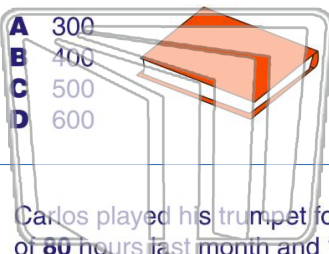
PREVIEW

Please [Sign In](#) or [Sign Up](#) to download the printable version of this worksheet

7

Estimate the total number of minutes Jeremy read to the **nearest hundred**.

- A 300
- B 400
- C 500
- D 600



390 this month. **Estimate** the total number of necklaces Alyssa and Shauna made, to the nearest hundred.

- A 500
- B 600
- C 700
- D 800

9

Carlos played his trumpet for a total of **80** hours last month and **110** hours this month. **Estimate** the total number of hours practiced, to the **nearest hundred**.

- A 100
- B 200
- C 300
- D 400



10

Emily loves to draw. She drew for **230 minutes** last week and **370 minutes** this week. **About how many minutes total did Emily draw?**

- A 400
- B 500
- C 600
- D 700



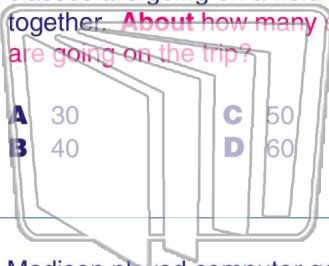


Name _____ Class _____ Date _____

1

Mr. Jones's class has **28** students. Mrs. Smith's class has **31**. Both classes are going on a field trip together. **About how many students are going on the trip?**

- A 30
- B 40
- C 50
- D 60



2

The **average** car is about _____ long.

- A 10 feet
- B 30 feet
- C 50 feet
- D 70 feet



A

3

Madison played computer games for **28** hours in May, **23** hours in June, and **31** hours in July. **Estimate the**

4

Nick collected seashells from the beach. He found **11** on Monday, **17** on Wednesday, and **8** on Friday.

5



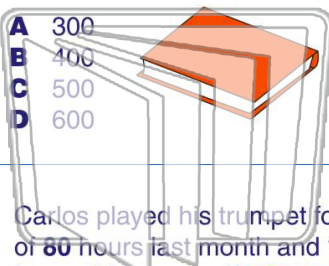
PREVIEW

Please [Sign In](#) or [Sign Up](#) to download the printable version of this worksheet

7

Estimate the total number of minutes Jeremy read to the **nearest hundred**.

- A 300
- B 400
- C 500
- D 600



390 this month. **Estimate** the total number of necklaces Alyssa and Shauna made, to the nearest hundred.

- A 500
- B 600
- C 700
- D 800

9

Carlos played his trumpet for a total of **80** hours last month and **110** hours this month. **Estimate** the total number of hours practiced, to the **nearest hundred**.

- A 100
- B 200
- C 300
- D 400



10

Emily loves to draw. She drew for **230 minutes** last week and **370 minutes** this week. **About how many minutes total did Emily draw?**

- A 400
- B 500
- C 600
- D 700

