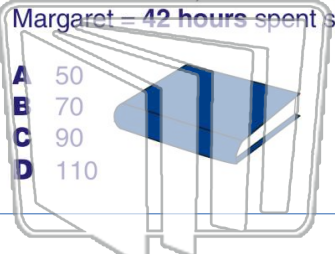




Name _____ Class _____ Date _____

1 **Estimate** the total number of hours spent studying, to the **nearest ten**.
Max = 39 hours, Sara = 28 hours, Margaret = 42 hours spent studying

- A 50
- B 70
- C 90
- D 110



2 Grace read for 190 minutes last week and 280 minutes this week. **Estimate** the total number of minutes she read, to the **nearest hundred**.

- A 300
- B 400
- C 500
- D 600



3 Katie spent 250 minutes on her science project last week. This week she spent 130 minutes to finish it.

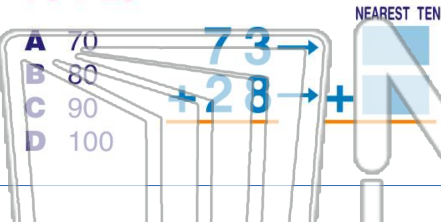
4 Box 1 has 320 game pieces, box 2 has 380 pieces, and box 3 has 240. **What is the total number of game pieces in all three boxes?**



5 **PREVIEW**
Please [Sign In](#) or [Sign Up](#) to download the printable version of this worksheet

7 **estimate** the sum.
 $73 + 28 =$

- A 70
- B 80
- C 90
- D 100



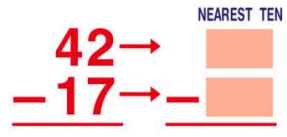
estimate the sum.
 $19 + 38 =$

- A 40
- B 50
- C 60
- D 70




9 Round to the nearest ten to **estimate** the difference.
 $42 - 17 =$

- A 40
- B 30
- C 20
- D 10



10 Round to the nearest ten to **estimate** the difference.
 $88 - 29 =$

- A 90
- B 80
- C 70
- D 60

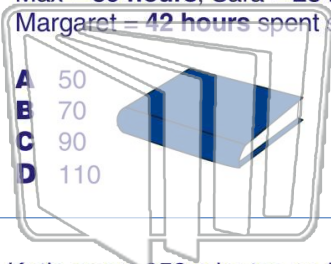




Name _____ Class _____ Date _____

1 **Estimate** the total number of hours spent studying, to the **nearest ten**.
Max = 39 hours, Sara = 28 hours, Margaret = 42 hours spent studying

- A 50
- B 70
- C 90
- D 110



2 Grace read for 190 minutes last week and 280 minutes this week. **Estimate** the total number of minutes she read, to the **nearest hundred**.

- A 300
- B 400
- C 500
- D 600



3 Katie spent 250 minutes on her science project last week. This week she spent 130 minutes to finish it.

4 Box 1 has 320 game pieces, box 2 has 380 pieces, and box 3 has 240. **What is the total number of game pieces in all three boxes?**

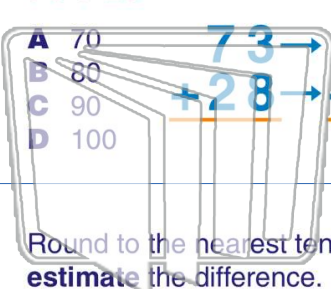
PREVIEW

Please [Sign In](#) or [Sign Up](#) to download the printable version of this worksheet

7 **estimate** the sum.

73 + 28 =

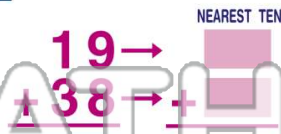
- A 70
- B 80
- C 90
- D 100



estimate the sum.

19 + 38 =

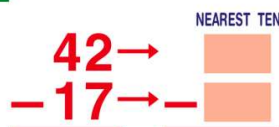
- A 40
- B 50
- C 60
- D 70



9 Round to the nearest ten to **estimate** the difference.

42 - 17 =

- A 40
- B 30
- C 20
- D 10



10 Round to the nearest ten to **estimate** the difference.

88 - 29 =

- A 90
- B 80
- C 70
- D 60

