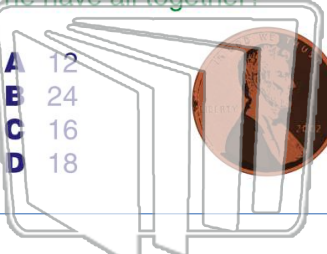




Name _____ Class _____ Date _____

1 Jim has **6** bags. Each bag has **4** pennies. How many pennies does he have all together?



- A 12
- B 24
- C 16
- D 18

2 What number completes the number sentence?

$3 \times 6 = \square$

- A 15
- B 16
- C 17
- D 18



3 Mike wants to give **2** pencils to each of his friends. He has **4** friends. How many pencils does he need?

4 Ethan has **4** rows of corn plants in his garden. There are **5** plants in each row. How many corn plants



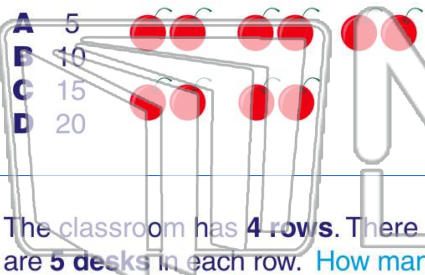
PREVIEW

Please [Sign In](#) or [Sign Up](#) to download the printable version of this worksheet

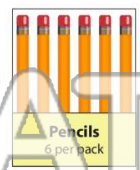
7 There are **5** packages of how many pencils are there all together?

$2 \times 5 = \square$

- A 5
- B 10
- C 15
- D 20



- A 20
- B 30
- C 40
- D 50



9 The classroom has **4** rows. There are **5** desks in each row. How many desks are there in the classroom?

- A 20
- B 22
- C 24
- D 26

10 What is 2×8 ?

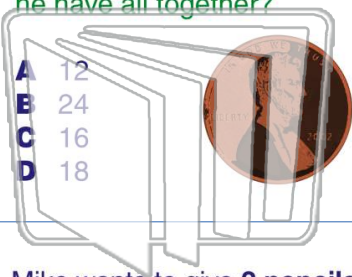
- A 15
- B 16
- C 17
- D 18





Name _____ Class _____ Date _____

1 Jim has 6 bags. Each bag has 4 pennies. How many pennies does he have all together?



- A 12
- B 24
- C 16
- D 18

2 What number completes the number sentence?

$$3 \times 6 = \square$$

- A 5
- B 6
- C 17
- D 18



3 Mike wants to give 2 pencils to each of his friends. He has 4 friends. How many pencils does he need?

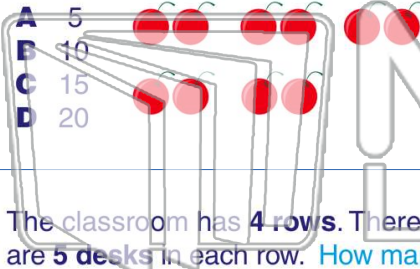
4 Ethan has 4 rows of corn plants in his garden. There are 5 plants in each row. How many corn plants



PREVIEW

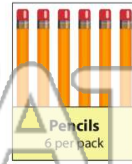
Please [Sign In](#) or [Sign Up](#) to download the printable version of this worksheet

7 $2 \times 5 = \square$




- A 5
- B 10
- C 15
- D 20

8 There are 5 packages. How many pencils are there all together?



- A 20
- B 30
- C 40
- D 50

9 The classroom has 4 rows. There are 5 desks in each row. How many desks are there in the classroom?



- A 20
- B 22
- C 24
- D 26

10 What is 2×8 ?

- A 15
- B 16
- C 17
- D 18

