



Name _____ Class _____ Date _____

1 Which number is the **same as** three hundred seventy-six?

- A 367 C 306
B 376 D 76

2 Which number is the **same as** four hundred two?

- A 420
B 422
C 402
D 42

3 Which number is the **same as** 400?

- A 400 ones

4 What is the number for

$$300 + 50 + 3$$

5



PREVIEW

Please [Sign In](#) or [Sign Up](#) to download the printable version of this worksheet

7

- C 459 ones
D 459 tens

- B 454
C 50045
D 45

9 What is the number for $400 + 50 + 2$?

- A 4,052
B 452
C 400,502
D 425

10 Sarah's school has **five hundred thirty-six** students. How does she write that number?





- A 5,360
B 563
C 506
D 536





Name _____ Class _____ Date _____

1 Which number is the **same as** three hundred seventy-six?

- A  367
- B  376
- C  306
- D  76

(B)

2 Which number is the **same as** four hundred two?

- A 420
- B 422
- C 402
- D 42

(C)

3 Which number is the **same as** 400?

- A 400 ones

(A)

4 What is the number for

$$300 + 50 + 3$$

(D)

5



(B)

PREVIEW

Please [Sign In](#) or [Sign Up](#) to download the printable version of this worksheet

7

- C 459 ones
- D 459 tens

- B 454
- C 50045
- D 45

(A)

9 What is the number for $400 + 50 + 2$?

- A 4,052
- B 452
- C 400,502
- D 425

(B)

10 Sarah's school has **five hundred thirty-six** students. How does she write that number?

- A 5,360
- B 563
- C 506
- D 536



(D)