




Name _____ Class _____ Date _____

1 **645** is **even**.



2 Which set has **only odd** numbers?

- A 367, 689, 340
- B 245, 470, 376
- C 123, 249, 222
- D 237, 345, 679

3 _____ is an **even** number.



4 The **sum** of the first three odd numbers --1, 3, 5-- is _____.



PREVIEW

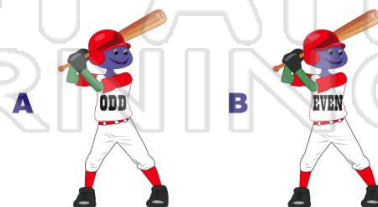
Please [Sign In](#) or [Sign Up](#) to download the printable version of this worksheet

- 7
- A
 - B
- A 1
 - B 3
 - C 9
 - D 4

9 Finish the pattern.
5, 10, 15, 20, _____
Is the next number **odd** or **even**?

- A odd
- B even


10 Is **24,468** even or odd?





Name _____ Class _____ Date _____

1 **645** is **even**.



A

B

(B)

2 Which set has **only odd** numbers?

- A 367, 689, 340
- B 245, 470, 376
- C 123, 249, 222
- D 237, 345, 679

(D)

3 _____ is an **even** number.

A



C



(A)

4 The **sum** of the first three odd numbers --1, 3, 5-- is _____.

ODD

EVEN

(A)

5



(C)

PREVIEW

Please [Sign In](#) or [Sign Up](#) to download the printable version of this worksheet

7

A



B



- A 1
- B 3

- C 9
- D 4

(D)

9

Finish the pattern.
5, 10, 15, 20, _____
Is the next number **odd** or **even**?

- A odd
- B even

(A)

10 Is **24,468** even or odd?

A



B



(B)