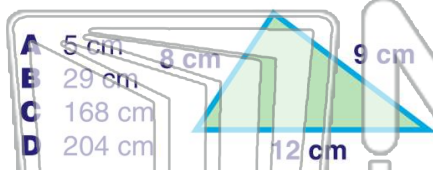





Name _____ Class _____ Date _____

1 What is the **perimeter** of this triangle?



- A 5 cm
- B 29 cm
- C 168 cm
- D 204 cm


2 The **perimeter** of this polygon is _____.



- A 12 units
- B 15 units
- C 24 units
- D 30 units

3 If the **perimeter** of this square is equal to 16 cm, how long is each of the sides?

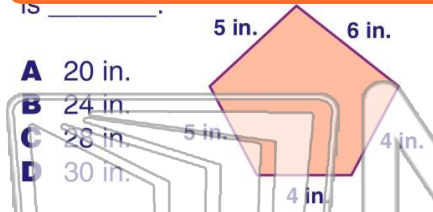
4 Find the **perimeter** of this polygon.



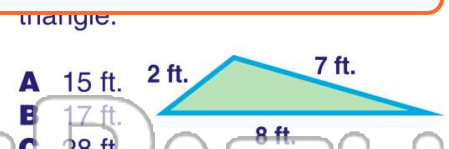
PREVIEW

Please [Sign In](#) or [Sign Up](#) to download the printable version of this worksheet

7 _____

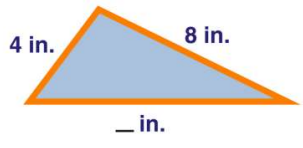


- A 20 in.
- B 24 in.
- C 28 in.
- D 30 in.



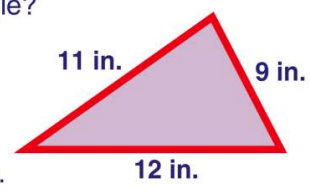
- A 15 ft.
- B 17 ft.
- C 28 ft.
- D 112 ft.

9 If the **perimeter** of this triangle is equal to 22 inches, how long is the third side?



- A 10 in.
- B 11 in.
- C 12 in.
- D 13 in.

10 What is the **perimeter** of this triangle?



- A 20 in.
- B 32 in.
- C 99 in.
- D 108 in.