



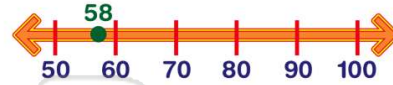
Name \_\_\_\_\_ Class \_\_\_\_\_ Date \_\_\_\_\_

1 The number 37 is **between** which two tens?

- A 20 and 30
- B 30 and 40
- C 7 and 30
- D 3 and 7

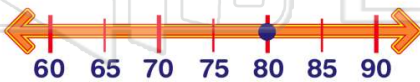
## TENS?

2 What is 58 rounded to the **nearest ten**?

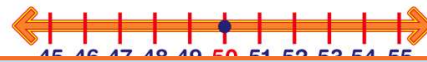


- A 50
- B 80
- C 60
- D 100

3 Which number rounds to 80?



4 Which number does **not** round to 50?



5



## PREVIEW

Please [Sign In](#) or [Sign Up](#) to download the printable version of this worksheet

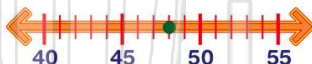
7

- C 30
- D 35

- B 357
- C 300
- D 348

9 What is \$48 rounded to the **nearest \$10**?

- A \$40
- B \$48
- C \$50
- D \$100



10 There are 156 ducks in the pond. What is 156 rounded to the **nearest ten**?

- A 100
- B 200
- C 150
- D 160





Name \_\_\_\_\_ Class \_\_\_\_\_ Date \_\_\_\_\_

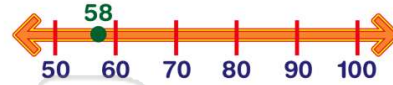
1 The number 37 is **between** which two tens?

- A 20 and 30
- B 30 and 40
- C 7 and 30
- D 3 and 7

## TENS?

(B)

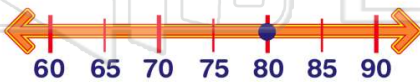
2 What is 58 rounded to the **nearest ten**?



- A 50
- B 80
- C 60
- D 100

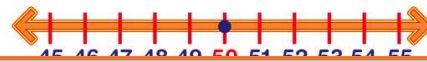
(C)

3 Which number rounds to 80?



(D)

4 Which number does **not** round to 50?



(C)

5



(B)

## PREVIEW

Please [Sign In](#) or [Sign Up](#) to download the printable version of this worksheet

7

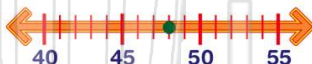
- C 30
- D 35

- B 357
- C 300
- D 348

(D)

9 What is \$48 rounded to the **nearest \$10**?

- A \$40
- B \$48
- C \$50
- D \$100



(C)

10 There are 156 ducks in the pond. What is 156 rounded to the **nearest ten**?

- A 100
- B 200
- C 150
- D 160



(D)