



Name \_\_\_\_\_ Class \_\_\_\_\_ Date \_\_\_\_\_

1 Name the figure.

- A square
- B triangle
- C circle
- D rhombus



2 How many line segments does a **rhombus** have?

- A 2
- B 3
- C 4
- D 5



3 Is a circle a **polygon**?

- A yes
- B no



4 A **pentagon** has 5 sides.  
True or false?

5



## PREVIEW

Please [Sign In](#) or [Sign Up](#) to download the printable version of this worksheet





7

B rhombus  D hexagon 

- B 3
- C 2
- D 5



9 Which shape cannot have a right angle?

- A triangle 
- B square 
- C circle 
- D rectangle 

10 Name the figure.

- A square
- B triangle
- C circle
- D cone





Name \_\_\_\_\_ Class \_\_\_\_\_ Date \_\_\_\_\_

1 Name the figure.


- A square
- B triangle
- C circle
- D rhombus



(A)

2 How many line segments does a **rhombus** have?

- A 2
- B 3
- C 4
- D 5



(C)

3 Is a circle a **polygon**?

- A yes
- B no



(B)

4 A **pentagon** has 5 sides.  
True or false?

(A)

5



(D)

## PREVIEW

Please [Sign In](#) or [Sign Up](#) to download the printable version of this worksheet

7





- B rhombus 
- D hexagon 

- B 3
- C 2
- D 5



(A)

9 Which shape cannot have a right angle?

- A triangle 
- B square 
- C circle 
- D rectangle 

(C)

10 Name the figure.

- A square
- B triangle
- C circle
- D cone



(C)