











Name _____ Class _____ Date _____

1 This shape has **no corners**.
Name the shape.

- A circle  C square 
- B hexagon  D triangle 

2 This shape has **three corners**.
What shape could it be?

- A rectangle  C square 
- B hexagon  D triangle 

3 A **right triangle** always has
one right angle.
True or false?



4 How many angles does a
hexagon have?
A 4





PREVIEW

Please [Sign In](#) or [Sign Up](#) to download
the printable version of this worksheet

7 C rectangle 
D trapezoid

B 5 
C 6
D 7





9 Which shape has **more sides**
than a square?
A rectangle 
B hexagon
C rhombus
D triangle

10 An **equilateral triangle** has
3 **equal angles**.
True or false?
A true 
B false







Name _____ Class _____ Date _____

1 This shape has **no corners**.
Name the shape.

- A circle  C square  (A)
- B hexagon  D triangle 

2 This shape has **three corners**.
What shape could it be?

- A rectangle  C square  (D)
- B hexagon  D triangle 

3 A **right triangle** always has
one right angle.
True or false?



(A)

4 How many angles does a
hexagon have?



A 4

(C)



PREVIEW

Please [Sign In](#) or [Sign Up](#) to download
the printable version of this worksheet

5 C rectangle 
D trapezoid

B 5 
C 6
D 7

9 Which shape has **more sides**
than a square?



(B)

10 An **equilateral triangle** has
3 **equal** angles.
True or false?

- A true
B false



(A)