

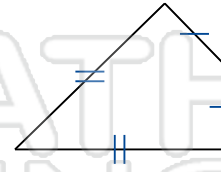
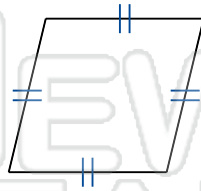
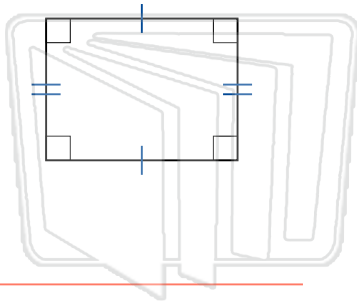


Identify Quadrilaterals

Math

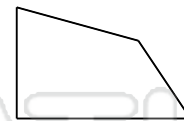
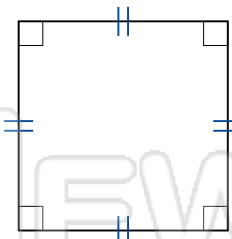
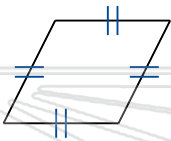
Name _____ Class _____ Date _____

Identify the Type For Each Quadrilateral



PREVIEW

Please [Sign In](#) or [Sign Up](#) to download the printable version of this worksheet



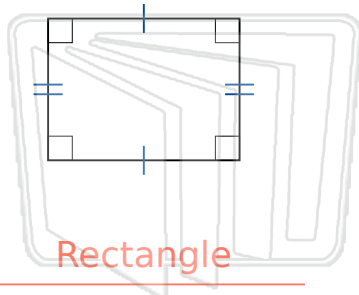


Identify Quadrilaterals - Answer Key

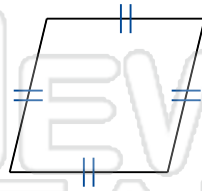
Math

Name _____ Class _____ Date _____

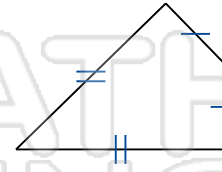
Identify the Type For Each Quadrilateral



Rectangle



Rhombus

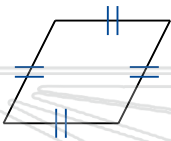


Kite

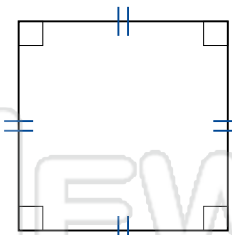


PREVIEW

Please [Sign In](#) or [Sign Up](#) to download the printable version of this worksheet



Rhombus



Square



Quadrilateral