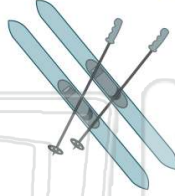




Name _____ Class _____ Date _____

1 Ryan and Steve like to ski. Which **temperature** is best for skiing?

- A 1°F
- B 32°F
- C 75°F
- D 90°F



2 The **temperature** is ____ ° F.

- A 40
- B 45
- C 50
- D 55



3 It is 40°C outside. Does Maya need to wear a coat?

- A yes



4 The temperature is 0°C. Which does Olivia need to wear outside?

- A



- C



5



PREVIEW

Please [Sign In](#) or [Sign Up](#) to download the printable version of this worksheet

7

- C 5
- D 0




- C 55
- D 50



9 The **thermometer** shows ____ ° F.

- A 45
- B 35
- C 25
- D 15



10 It is ____ ° F.

- A 40
- B 50
- C 60
- D 70

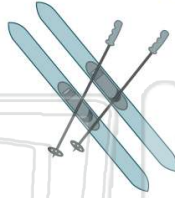




Name _____ Class _____ Date _____

1 Ryan and Steve like to ski. Which **temperature** is best for skiing?

- A 1°F
- B 32°F
- C 75°F
- D 90°F



(B)

2 The **temperature** is ____ ° F.

- A 40
- B 45
- C 50
- D 55



(A)

3 It is 40°C outside. Does Maya need to wear a coat?

- A yes



(B)

4 The temperature is 0°C. Which does Olivia need to wear outside?

- A 
- C 

(D)



5 (B)

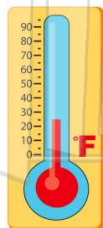
PREVIEW

Please [Sign In](#) or [Sign Up](#) to download the printable version of this worksheet

7 (C)

9 The **thermometer** shows ____ ° F.

- A 45
- B 35
- C 25
- D 15



(C)

10 It is ____ ° F.

- A 40
- B 50
- C 60
- D 70



(C)