



Name _____ Class _____ Date _____

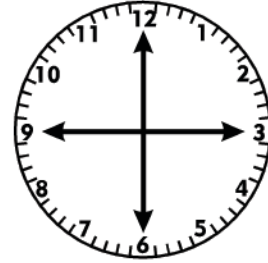
Write **quarter to**, **quarter past**, **o'clock** and **half past** near the minute hand position which would show that time on the clock.

One hour = _____ minutes.

Half an hour = _____ minutes.

A quarter of an hour = _____ minutes.

Three quarters of an hour = _____ minutes.



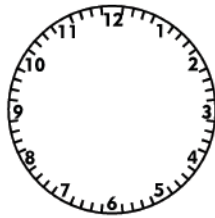
Draw hands on the clocks and write the digital times.



A quarter past six



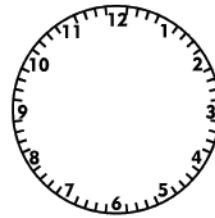
Twelve thirty



A quarter to five



A quarter past two



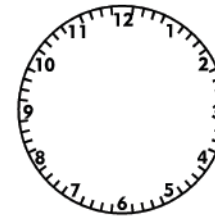
Half past nine



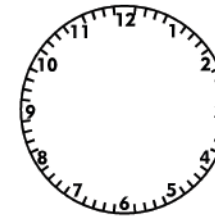
A quarter to four



A quarter to 9



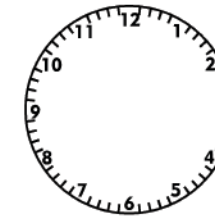
A quarter past 10



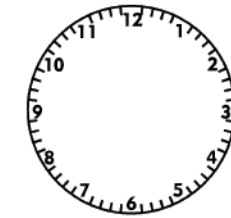
Half past 6



A quarter past 3



A quarter to 11



A quarter past 8



Time - Answer Key

Math

Name _____ Class _____ Date _____

ANSWER KEY

Write **quarter to**, **quarter past**, **o'clock** and **half past** near the minute hand position which would show that time on the clock.

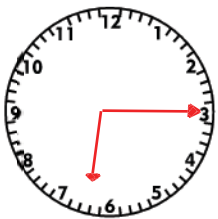
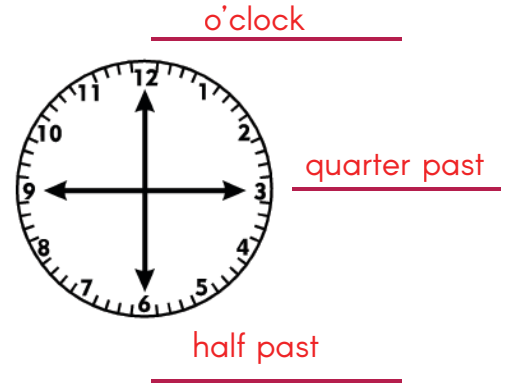
One hour = 60 minutes.

Half an hour = 30 minutes.

A quarter of an hour = 15 minutes.

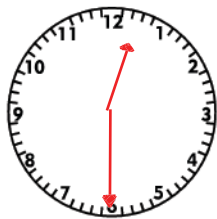
Three quarters of an hour = 45 minutes.

Draw hands on the clocks and write the digital times.



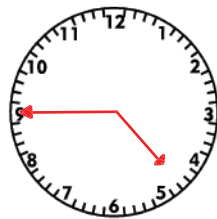
6:15

A quarter past six



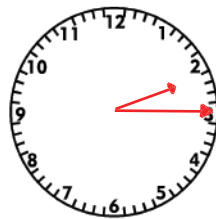
12:30

Twelve thirty



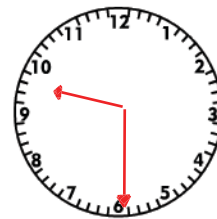
4:45

A quarter to five



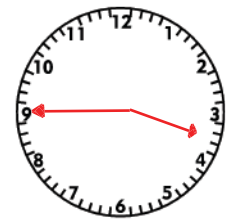
2:15

A quarter past two



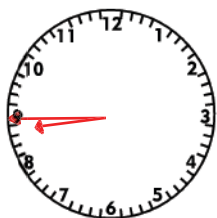
9:30

Half past nine



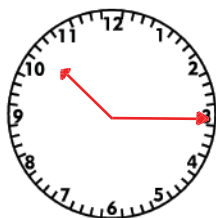
3:45

A quarter to four



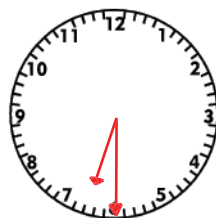
8:45

A quarter to 9



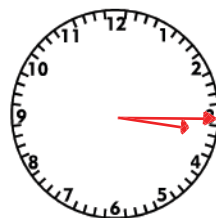
10:15

A quarter



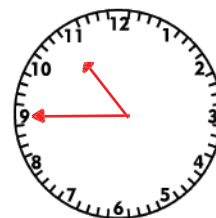
6:30

Half past 6



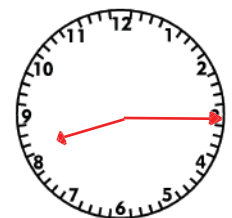
3:15

A quarter past 3



10:45

A quarter to 11



8:15

A quarter past 8