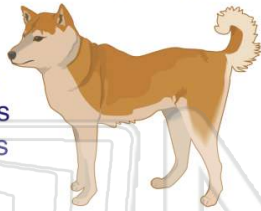




Name \_\_\_\_\_ Class \_\_\_\_\_ Date \_\_\_\_\_


1 How much could Denny's dog weigh?

A 20 inches  
B 20 pounds  
C 20 ounces  
D 20 ton




2 My desk is about \_\_\_\_\_ tall.

A 2 inches  
B 2 feet  
C 2 miles  
D 2 pounds




3 Ken bought a new basketball. How much might it weigh?

A 1 inch



4 Which unit of measure is best for measuring the length of a hot dog?

A foot



5



## PREVIEW

7 Please [Sign In](#) or [Sign Up](#) to download the printable version of this worksheet

C 15 feet  
D 12 pounds



C 50 inch  
D 50 pound




9 True or false?  
A pencil weighs about 2 pounds.

A true  
B false



10 Which unit of measure is best for measuring the length of a paper clip?

A foot  
B inch  
C yard  
D pound

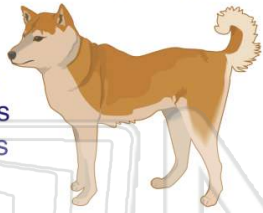




Name \_\_\_\_\_ Class \_\_\_\_\_ Date \_\_\_\_\_

1 How much could Denny's dog weigh?


A 20 inches  
B 20 pounds  
C 20 ounces  
D 20 ton



(B)

2 My desk is about \_\_\_\_\_ tall.

A 2 inches  
B 2 feet  
C 2 miles  
D 2 pounds



(B)

3 Ken bought a new basketball. How much might it weigh?

A 1 inch



(B)

4 Which unit of measure is best for measuring the length of a hot dog?



(D)

5



(A)

**PREVIEW**

Please [Sign In](#) or [Sign Up](#) to download the printable version of this worksheet

7

C 15 feet  
D 12 pounds



(A)

C 50 inch  
D 50 pound



(A)

9 True or false?  
A pencil weighs about 2 pounds.


A true  
B false



(B)

10 Which unit of measure is best for measuring the length of a paper clip?

A foot  
B inch  
C yard  
D pound



(B)