



Name \_\_\_\_\_ Class \_\_\_\_\_ Date \_\_\_\_\_

1  $\$11.07$   
 $+ \$2.97$

- A \$14.14
- B \$14.06
- C \$14.04
- D \$12.04



2  $1,489$   
 $+ 1,333$

- A 2,822
- B 2,821
- C 3,822
- D 2,812



3 There are 1,960 people watching a game on the soccer field. Next to the soccer field there are 1,444 people watching a football game. How many people are watching football and soccer total?

- A 3,414 people
- B 4,404 people
- C 4,304 people
- D 3,404 people



4 Last month, Tony's Pizzeria sold 7,112 pizzas. This month 7,102 pizzas were sold. How many pizzas did Tony's Pizzeria sell in these two months?

- A 14,224 pizzas
- B 14,214 pizzas
- C 14,314 pizzas
- D 14,213 pizzas



5  $\$99.71$   
 $+ \$9.17$

- A \$109.88
- B \$110.88
- C \$117.88
- D \$108.88



6  $4,523$   
 $+ 3,326$

- A 8,849
- B 7,949
- C 7,849
- D 7,858



7 There was an election for a new student body president. Brian received 792 votes. Jamie received 531 votes. How many people voted in all?

- A 1,323 people
- B 1,333 people
- C 1,233 people
- D 1,423 people



8 There are 3,286 people at the train station. A new train just arrived, dropping off 1,209 people. Now, how many people are at the train station in all?

- A 4,493 people
- B 5,503 people
- C 4,483 people
- D 4,495 people



9  $\$97.66$   
 $+ \$15.88$

- A \$114.54
- B \$113.54
- C \$113.44
- D \$123.44



10 In the month of January, customers rented 6,242 videos from the video store. In the month of February, customers rented 5,909 videos from the video store. In January and February, how many videos were rented in all?

- A 12,151 videos
- B 13,051 videos
- C 12,261 videos
- D 12,161 videos





Name \_\_\_\_\_ Class \_\_\_\_\_ Date \_\_\_\_\_

1  $\$11.07$   
 $+ \$2.97$



A \$14.14  
B \$14.06  
C \$14.04  
D \$12.04

(C)


2  $1,489$   
 $+ 1,333$



A 2,822  
B 2,821  
C 3,822  
D 2,812

(A)

3 There are 1,960 people watching a game on the soccer field. Next to the soccer field there are 1,444 people watching a football game. How many people are watching football and soccer total?



A 3,414 people  
B 4,404 people  
C 4,304 people  
D 3,404 people

(D)

4 Last month, Tony's Pizzeria sold 7,112 pizzas. This month 7,102 pizzas were sold. How many pizzas did Tony's Pizzeria sell in these two months?



A 14,224 pizzas  
B 14,214 pizzas  
C 14,314 pizzas  
D 14,213 pizzas

(B)

5  $\$99.71$   
 $+ \$9.17$



A \$109.88  
B \$110.88  
C \$117.88  
D \$108.88

(D)


6  $4,523$   
 $+ 3,326$



A 8,849  
B 7,949  
C 7,849  
D 7,858

(C)


7 There was an election for a new student body president. Brian received 792 votes. Jamie received 531 votes. How many people voted in all?



A 1,323 people  
B 1,333 people  
C 1,233 people  
D 1,423 people

(A)

8 There are 3,286 people at the train station. A new train just arrived, dropping off 1,209 people. Now, how many people are at the train station in all?



A 4,493 people  
B 5,503 people  
C 4,483 people  
D 4,495 people

(D)

9  $\$97.66$   
 $+ \$15.88$



A \$114.54  
B \$113.54  
C \$113.44  
D \$123.44

(B)

10 In the month of January, customers rented 6,242 videos from the video store. In the month of February, customers rented 5,909 videos from the video store. In January and February, how many videos were rented in all?



A 12,151 videos  
B 13,051 videos  
C 12,261 videos  
D 12,161 videos

(A)