






Name _____ Class _____ Date _____

1 $0.07 =$ 


A $\frac{7}{10,000}$ C $\frac{7}{100}$
 B $\frac{7}{1,000}$ D $\frac{7}{10}$

2 $0.89 =$ 

A $\frac{89}{10}$ C $\frac{89}{1,000}$
 B $\frac{89}{100}$ D $\frac{89}{10,000}$

3 $0.45 = \frac{45}{100}$  True or false?

A true

4 $0.3 =$ 

A $\frac{3}{1,000}$ C $\frac{3}{10}$


5 

PREVIEW


Please [Sign In](#) or [Sign Up](#) to download the printable version of this worksheet

7 $0.45 =$  True or false?


B false

8 $0.08 =$ 

A $\frac{8}{1,000}$ C $\frac{8}{10}$
 B $\frac{8}{100}$ D 8

9 $0.45 =$ 


A 45 C $\frac{45}{1,000}$
 B $\frac{45}{10,000}$ D $\frac{45}{100}$

10 $0.15 = \frac{15}{1,000}$  True or false?

A true
 B false




Name _____ Class _____ Date _____

1 $0.07 =$ 

A $\frac{7}{10,000}$ C $\frac{7}{100}$ (C)

B $\frac{7}{1,000}$ D $\frac{7}{10}$


2 $0.89 =$ 

A $\frac{89}{10}$ C $\frac{89}{1,000}$ (B)

B $\frac{89}{100}$ D $\frac{89}{10,000}$

3 $0.45 = \frac{45}{100}$  True or false?

A true (A)

4 $0.3 =$ 


A $\frac{3}{1,000}$ C $\frac{3}{10}$ (C)

5 

PREVIEW


Please [Sign In](#) or [Sign Up](#) to download the printable version of this worksheet

7 (C)

B false  True or false?


1,000 10

B $\frac{8}{100}$ D 8

9 $0.45 =$ 

A 45 C $\frac{45}{1,000}$ (D)

B $\frac{45}{10,000}$ D $\frac{45}{100}$

10 $0.15 = \frac{15}{1,000}$  True or false?

A true (B)

B false