



Name _____ Class _____ Date _____

1 64 divided by 8 is 8.

True or false?

- A true
- B false



2 $55 \div 4 =$

- A 11 r 9
- B 12
- C 13 r 3
- D 15



3 George wants to plant roses in his garden. He has 14 bushes to plant. He wants to plant them in 2 rows. How many bushes will be in each row?

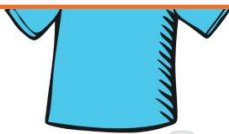
4 $99 \div 9 = 10 \text{ r } 9$



PREVIEW

Please [Sign In](#) or [Sign Up](#) to download the printable version of this worksheet

- B 8
- C 7
- D 5



- A 7
- B 13
- C 26
- D 84



9 Divide:
 $83 \div 3 =$


- A 80
- B 50
- C 31 r 3
- D 27 r 2



10 The quotient of 56 divided by 5 is 11 r 1.

- A true
- B false

True or false?





Name _____ Class _____ Date _____

1 64 divided by 8 is 8.

True or false?

- A true
- B false



A

2 $55 \div 4 =$

- A 11 r 9
- B 12
- C 13 r 3
- D 15



C

3 George wants to plant roses in his garden. He has 14 bushes to plant. He wants to plant them in 2 rows. How many bushes will be in each row?

4 $99 \div 9 = 10 \text{ r } 9$

C

B

5



D

PREVIEW

Please [Sign In](#) or [Sign Up](#) to download the printable version of this worksheet

7

- B 8
- C 7
- D 5



- A 7
- B 13
- C 26
- D 84



B

9 Divide:
 $83 \div 3 =$

- A 80
- B 50
- C 31 r 3
- D 27 r 2




D

10 The quotient of 56 divided by 5 is 11 r 1.

- A true
- B false

True or false?



A