



Division


Math

Name _____ Class _____ Date _____

1 $42 \div 2 = \underline{\quad}$



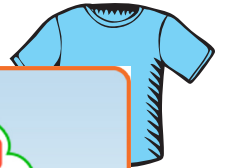
6 $30 \div 2 = \underline{\quad}$



2 For a field trip to the museum, **42 students** will be divided into **groups of 6**. How many groups will there be?



7 There are **5 drawers** in my dresser. I have **35 shirts**. How many shirts can I put in each drawer?



3



PREVIEW

Please [Sign In](#) or [Sign Up](#) to download the printable version of this worksheet

4



5 $55 \div 4 = \underline{\quad}$

11 r 9

13 r 3

12 r 2

15 r 4

10 The quotient of $60 \div 4$ is 20. Circle the answer.



True or false?

true

false



Division - Answer Key


Math

Name _____ Class _____ Date _____

1 $42 \div 2 = \underline{21}$

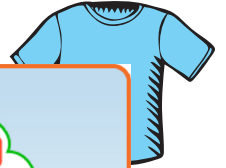


6 $30 \div 2 = \underline{15}$



2 For a field trip to the museum, 42 students will be divided into groups of 6. How many groups will there be?

7 There are 5 drawers in my dresser. I have 35 shirts. How many shirts can I put in each drawer?



3



PREVIEW

Please [Sign In](#) or [Sign Up](#) to download the printable version of this worksheet

4

$48 \div 8 = 6$



5 $55 \div 4 = \underline{\quad}$

11 r 9

13 r 3

12 r 2

15 r 4

10 The quotient of $60 \div 4$ is 20. Circle the answer.

True or false?

true

false



$60 \div 4 = 15$