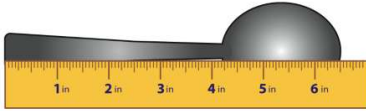




Name _____ Class _____ Date _____

1 What is the **length** of the **spoon**?

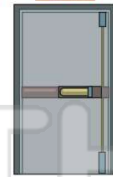


- A 6 inches
- B $6\frac{1}{2}$ inches
- C $6\frac{3}{4}$ inches
- D $6\frac{1}{2}$ feet

2 The height of the door is **2 meters**. How many **centimeters** tall is the door?

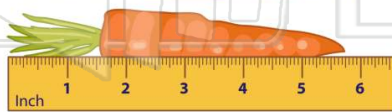
1 meter = 100 centimeters

EXIT




- A 25 cm
- B 50 cm
- C 100 cm
- D 200 cm

3 The carrot is _____ inches long.



4 The picture frame is **30 centimeters** long. How many **decimeters** long is it?

1 dm = 10 cm



- A 1 dm

5



PREVIEW

Please [Sign In](#) or [Sign Up](#) to download the printable version of this worksheet

7

- A 0.2 km
- B 2 km
- C 20 km
- D 200 km



D 7



9 David's pen holds _____ of ink.

- A 2 mL
- B 20 mL
- C 2 L
- D 20 L



10 The stem of a flower is **20 centimeters** in length. How long is the stem in **millimeters**?

1 cm = 10 mm

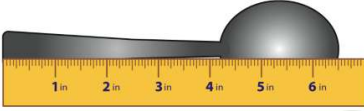
- A 2 mm
- B 20 mm
- C 200 mm
- D 2,000 mm





Name _____ Class _____ Date _____

1 What is the **length** of the **spoon**?



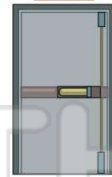
- A 6 inches
- B $6\frac{1}{2}$ inches
- C $6\frac{3}{4}$ inches
- D $6\frac{1}{2}$ feet

(B)

2 The height of the door is **2 meters**. How many **centimeters** tall is the door?

1 meter = 100 centimeters

EXIT



- A 25 cm
- B 50 cm
- C 100 cm
- D 200 cm

(D)


3 The carrot is _____ **inches** long.



(A)

4 The picture frame is **30 centimeters** long. How many **decimeters** long is it?

1 dm = 10 cm



A 1 dm

(C)

5



(A)

PREVIEW

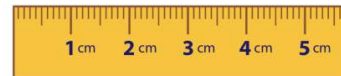
Please [Sign In](#) or [Sign Up](#) to download the printable version of this worksheet

7

- A 0.2 km
- B 2 km
- C 20 km
- D 200 km



D 7



(B)

9 David's pen holds _____ of ink.

- A 2 mL
- B 20 mL
- C 2 L
- D 20 L



(A)

10 The stem of a flower is **20 centimeters** in length. How long is the stem in **millimeters**?

1 cm = 10 mm

- A 2 mm
- B 20 mm
- C 200 mm
- D 2,000 mm



(C)