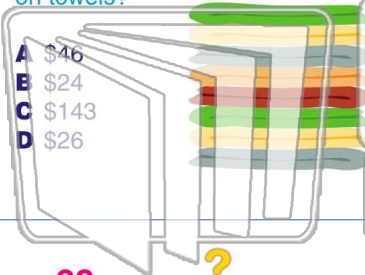




Name _____ Class _____ Date _____

1 Meredith bought 13 towels for \$11 each. How much did Meredith spend on towels?

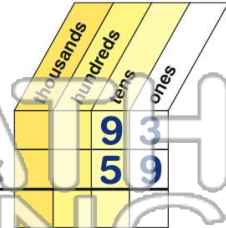
- A \$46
- B \$24
- C \$143
- D \$26



2 The product of 93×59 is 5,487.

True or false?

- A true
- B false



3 68×73



4 $76 \times 54 =$



5



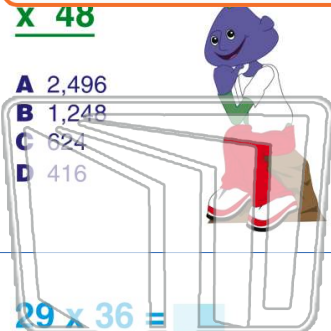
PREVIEW

Please [Sign In](#) or [Sign Up](#) to download the printable version of this worksheet

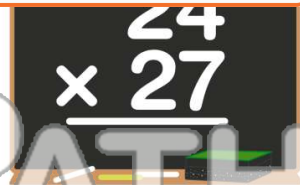
7

$\times 48$

- A 2,496
- B 1,248
- C 624
- D 416



- A 216
- B 480
- C 648
- D 6,480



9

$29 \times 36 =$

- A 780
- B 954
- C 1,044
- D 252

	T	H	T	O
			2	9
\times			3	6

10

13×97

- A 208
- B 416
- C 951
- D 1,261





Name _____ Class _____ Date _____

1 Meredith bought 13 towels for \$11 each. How much did Meredith spend on towels?

A \$46
B \$24
C \$143
D \$26

2 The product of 93×59 is 5,487. True or false?

A true
B false

3 68×73

4 $76 \times 54 =$ _____

PREVIEW

Please [Sign In](#) or [Sign Up](#) to download the printable version of this worksheet

7 $x 48$

A 2,496
B 1,248
C 624
D 416

8 24×27

A 216
B 480
C 648
D 6,480

9 $29 \times 36 =$

A 780
B 954
C 1,044
D 252

	T	H	T	O
			2	9
x			3	6

10 13×97

A 208
B 416
C 951
D 1,261