




Name _____ Class _____ Date _____

1 Garrett was saving to buy a new bike. The bike cost \$45.00. He received \$5.00 for doing his chores, \$11.00 for mowing his neighbor's lawn, and \$7.00 for cleaning the garage for his dad. How much more money does Garrett need to earn in order to buy his bike?

A \$22.00 C \$29.00
B \$40.00 D \$23.00




2 Keesha bought 4 red bracelets, 6 green bracelets, and 10 yellow bracelets. She gave 3 green bracelets to her sister and 2 red bracelets to her best friend. How many bracelets does Keesha have left?


A 20 bracelets
B 17 bracelets
C 15 bracelets
D 18 bracelets



3 When the teacher asks a question, 17 students raise their hands. When the teacher gives a clue to the answer, 5 more students raise their hands but 4 people put their hand



4 Grandma received 32 birthday cards in the mail. She opened 5 cards before breakfast, 8 cards before lunch, and then 13 before dinner. How many cards does she still




PREVIEW

7 Please [Sign In](#) or [Sign Up](#) to download the printable version of this worksheet


8

A 16 people
B 8 people
C 28 people
D 6 people




9 have left to do the rest of his homework?

A 34 minutes C 27 minutes
B 29 minutes D 11 minutes




9 Byron had \$16.50 in his pocket. At the zoo, he bought a ticket for \$5.00, a zoo t-shirt for \$7.00, and a plastic elephant for \$2.75. How much money does Byron have left?

A \$14.75
B \$12.75
C \$1.75
D \$7.75



10 Dexter collected 47 leaves for his Science project. He accidentally dropped 14 of them outside and he gave 7 leaves to his sister. How many leaves does Dexter have left?

A 33 leaves C 21 leaves
B 26 leaves D 40 leaves





Name _____ Class _____ Date _____

1 Garrett was saving to buy a new bike. The bike cost \$45.00. He received \$5.00 for doing his chores, \$11.00 for mowing his neighbor's lawn, and \$7.00 for cleaning the garage for his dad. How much more money does Garrett need to earn in order to buy his bike?

- A \$22.00
- B \$40.00
- C \$29.00
- D \$23.00



(A)

2 Keesha bought 4 red bracelets, 6 green bracelets, and 10 yellow bracelets. She gave 3 green bracelets to her sister and 2 red bracelets to her best friend. How many bracelets does Keesha have left?

- A 20 bracelets
- B 17 bracelets
- C 15 bracelets
- D 18 bracelets



(C)

3 When the teacher asks a question, 17 students raise their hands. When the teacher gives a clue to the answer, 5 more students raise their hands but 4 people put their hand



(A)

4 Grandma received 32 birthday cards in the mail. She opened 5 cards before breakfast, 8 cards before lunch, and then 13 before dinner. How many cards does she still



(A)



(B)

PREVIEW

Please [Sign In](#) or [Sign Up](#) to download the printable version of this worksheet

7

- A 16 people
- B 8 people
- C 28 people
- D 6 people



8 have left to do the rest of his homework?

- A 34 minutes
- B 29 minutes
- C 27 minutes
- D 11 minutes



(D)

9 Byron had \$16.50 in his pocket. At the zoo, he bought a ticket for \$5.00, a zoo t-shirt for \$7.00, and a plastic elephant for \$2.75. How much money does Byron have left?

- A \$14.75
- B \$12.75
- C \$1.75
- D \$7.75



(C)

10 Dexter collected 47 leaves for his Science project. He accidentally dropped 14 of them outside and he gave 7 leaves to his sister. How many leaves does Dexter have left?

- A 33 leaves
- B 26 leaves
- C 21 leaves
- D 40 leaves



(B)