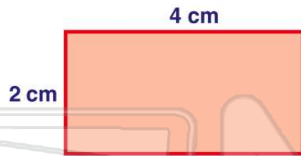




Name _____ Class _____ Date _____

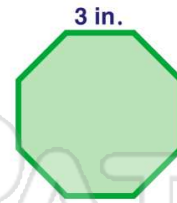
1 Find the **perimeter** of this **rectangle**.

- A 6 cm
- B 8 cm
- C 12 cm
- D 16 cm



2 The **perimeter** of this **octagon** is _____.

- A 24 in.
- B 11 in.
- C 3 in.
- D 18 in.



3 The soccer field is shaped like a **rectangle**. It is **120 m long** and **90 m wide**. What is the **perimeter** of the soccer field?



4 Find the **perimeter** of this **triangle**.

- A 12 cm
- B 6 cm
- C 18 cm



PREVIEW

Please [Sign In](#) or [Sign Up](#) to download the printable version of this worksheet

- B 40 ft.
- C 50 ft.
- D 150 ft.

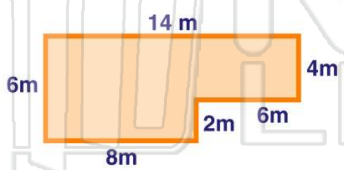


- D 36 m



9 Find the **perimeter**.

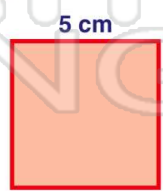
- A 39 m
- B 40 m
- C 25 m
- D 22 m



10 The **perimeter** of a **square** with a **length of 5 cm** is **20 cm**.

True or false?

- A true
- B false

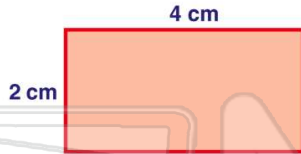




Name _____ Class _____ Date _____

1 Find the **perimeter** of this **rectangle**.

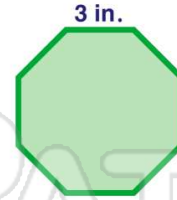
- A 6 cm
- B 8 cm
- C 12 cm
- D 16 cm



(C)

2 The **perimeter** of this **octagon** is _____.

- A 24 in.
- B 11 in.
- C 3 in.
- D 18 in.



(A)

3 The soccer field is shaped like a **rectangle**. It is **120 m long** and **90 m wide**. What is the **perimeter** of the soccer field?



(B)

4 Find the **perimeter** of this **triangle**.

- A 12 cm
- B 6 cm
- C 18 cm



(C)

5



(A)

PREVIEW

Please [Sign In](#) or [Sign Up](#) to download the printable version of this worksheet

7

- B 40 ft.
- C 50 ft.
- D 150 ft.



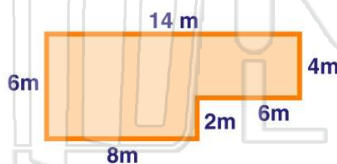
- D 36 m



(D)

9 Find the **perimeter**.

- A 39 m
- B 40 m
- C 25 m
- D 22 m



(B)

10 The **perimeter** of a **square** with a **length of 5 cm** is **20 cm**.

True or false?

- A true
- B false



(A)