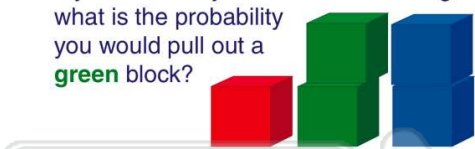




Name _____ Class _____ Date _____


1 If you reached your hand into this bag, what is the probability you would pull out a **green** block?




A $\frac{1}{5}$ B $\frac{2}{5}$ C $\frac{3}{5}$ D $\frac{4}{5}$

2 Which **colored paper clip** has the **lowest** probability of being chosen?

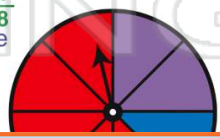
A red
B blue
C green



3 If a number cube with **numbers 1 to 6** is tossed, what is the probability that you would roll a **5**?




4 Which color has $\frac{1}{8}$ **probability** that the spinner will land on it?




PREVIEW

7 Please [Sign In](#) or [Sign Up](#) to download the printable version of this worksheet

C blue
D yellow

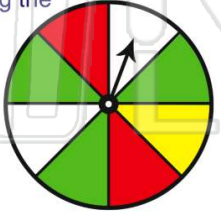


A high
B low




9 Which **colored space** has the **lowest** probability of having the spinner land on it?

A green
B yellow
C red
D white



10 Which **color apple** would you have the **highest** probability of choosing?

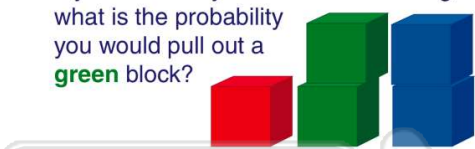
A red
B yellow
C green
D pink





Name _____ Class _____ Date _____

1 If you reached your hand into this bag, what is the probability you would pull out a **green** block?




A $\frac{1}{5}$ B $\frac{2}{5}$ C $\frac{3}{5}$ D $\frac{4}{5}$

(B)


2 Which **colored paper clip** has the **lowest** probability of being chosen?

A red
B blue
C green



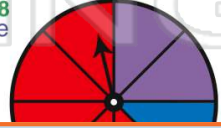
(B)

3 If a number cube with **numbers 1 to 6** is tossed, what is the probability that you would roll a **5**?



(C)

4 Which color has $\frac{1}{8}$ **probability** that the spinner will land on it?



(B)

5



PREVIEW

Please [Sign In](#) or [Sign Up](#) to download the printable version of this worksheet

(C)

7

C blue
D yellow



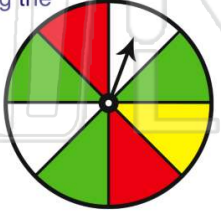
A high
B low



(A)

9 Which **colored space** has the **lowest** probability of having the spinner land on it?

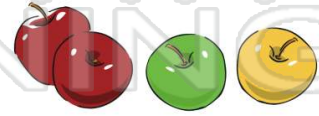
A green
B yellow
C red
D white



(B)

10 Which **color apple** would you have the **highest** probability of choosing?

A red
B yellow
C green
D pink



(A)