



Name _____ Class _____ Date _____

1

Which operation would you use to solve this problem?

Jason and Harry had lunch together. They each had a pop for \$1.25 each. Jason had a hamburger for \$2.25. Harry had a hot dog for \$1.75. **How much was their lunch bill?**

- A multiplication
- B division
- C addition
- D subtraction



2

Which operation would you use to solve this problem?

Diane bought **three** sweaters for **\$19.95** each. **How much did she spend on sweaters?**

- A division
- B multiplication
- C subtraction
- D addition



3

Which operation would you use to solve this problem?

Miss Robinson corrected $\frac{2}{4}$ of the math tests for her class on Monday. She corrected another

4

Longridge Elementary School raised \$1,900 for a local charity. They raised another \$2,300 for the same charity a year later. **How much did they give the charity?**

5



PREVIEW

Please [Sign In](#) or [Sign Up](#) to download the printable version of this worksheet

7

ride altogether?

- A $7 \div 7 = 1$
- B $7 \times 7 = 49$
- C $7 + 7 = 14$
- D $7 - 7 = 0$



How much did he spend in all?

- A $\$4.00 \times 12 = \48
- B $\$400 \div 12 = \33.33
- C $\$400 + 12 = \412
- D $\$400 - 12 = \388



9

The baby gorilla at the zoo weighed **5 pounds** at birth. Its father weighed **90 times** as much. **How much did the father gorilla weigh?**

- A $90 + 5 = 95$
- B $90 - 5 = 85$
- C $90 \div 5 = 18$
- D $90 \times 5 = 450$



10

Joanne planted a garden. She planted **10 rows** of corn with **14 plants** in each row. **How many corn plants did she plant?**

- A $14 + 10 = 24$
- B $14 - 10 = 4$
- C $14 \times 10 = 140$
- D $14 \div 10 = 1.4$






Name _____ Class _____ Date _____

1 Which operation would you use to solve this problem?

Jason and Harry had lunch together. They each had a pop for \$1.25 each. Jason had a hamburger for \$2.25. Harry had a hot dog for \$1.75. **How much was their lunch bill?**


A multiplication
B division
C addition
D subtraction



2 Which operation would you use to solve this problem?

Diane bought **three** sweaters for **\$19.95** each. **How much did she spend on sweaters?**

A division
B multiplication
C subtraction
D addition



3 Which operation would you use to solve this problem?

Miss Robinson corrected $\frac{2}{4}$ of the math tests for her class on Monday. She corrected another

4 Longridge Elementary School raised \$1,900 for a local charity. They raised another \$2,300 for the same charity a year later. **How much did they give the charity?**




PREVIEW

Please [Sign In](#) or [Sign Up](#) to download the printable version of this worksheet


7 ride altogether?

A $7 \div 7 = 1$
B $7 \times 7 = 49$
C $7 + 7 = 14$
D $7 - 7 = 0$




How much did he spend in all?

A $\$4.00 \times 12 = \48
B $\$400 \div 12 = \33.33
C $\$400 + 12 = \412
D $\$400 - 12 = \388



9 The baby gorilla at the zoo weighed **5 pounds** at birth. Its father weighed **90 times** as much. **How much did the father gorilla weigh?**

A $90 + 5 = 95$
B $90 - 5 = 85$
C $90 \div 5 = 18$
D $90 \times 5 = 450$



10 Joanne planted a garden. She planted **10 rows** of corn with **14 plants** in each row. **How many corn plants did she plant?**

A $14 + 10 = 24$
B $14 - 10 = 4$
C $14 \times 10 = 140$
D $14 \div 10 = 1.4$

