





Name _____ Class _____ Date _____

1 How many people does **each** represent?



2 How many people like **sports** best?



3 How many people like the **beach** best?



4 Which activity is the **least** popular?



5



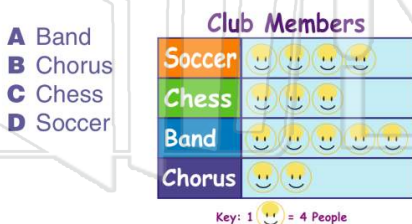
PREVIEW

7


Please [Sign In](#) or [Sign Up](#) to download the printable version of this worksheet



9 Which **club** has the **least** members?



10 How many people does **each** represent?





Name _____ Class _____ Date _____

1 How many people does **each** represent?

Favorite Summer Activities

A 1	Pool	
B 2	Beach	
C 3	Sports	
D 4	Picnic	

Key: 1 = 2 People

(B)

2 How many people like **sports best**?

Favorite Summer Activities

A 2	Pool	
B 4	Beach	
C 6	Sports	
D 10	Picnic	

Key: 1 = 2 People

(D)

3 How many people like the **beach best**?

Favorite Summer Activities

A 2	Pool	
B 4	Beach	
C 6	Sports	

(C)

4 Which activity is the **least** popular?

Favorite Summer Activities

A picnic	Pool	
B sports	Beach	
C beach	Sports	

(A)

5



(C)

PREVIEW

Please [Sign In](#) or [Sign Up](#) to download the printable version of this worksheet

7

C 6
D 3

Band	
Chorus	

Key: 1 = 4 People

C 4
D 8

Chess	
Band	
Chorus	

Key: 1 = 4 People

9 Which **club** has the **least** members?

Club Members

A Band	Soccer	
B Chorus	Chess	
C Chess	Band	
D Soccer	Chorus	

Key: 1 = 4 People

(B)

10 How many people does **each** represent?

Club Members

A 1	Soccer	
B 2	Chess	
C 3	Band	
D 4	Chorus	

Key: 1 = 4 People

(D)